

Lesson 19: Compare Numbers and Images

- Let's figure out which number is more.

Warm-up: Act It Out: Pass Out Snacks

Diego is passing out snacks to the students at his table.

He has 5 apples.

His teacher gives him 1 more apple.

How many apples does Diego have now?





19.1: Which Has More?


1.



2.



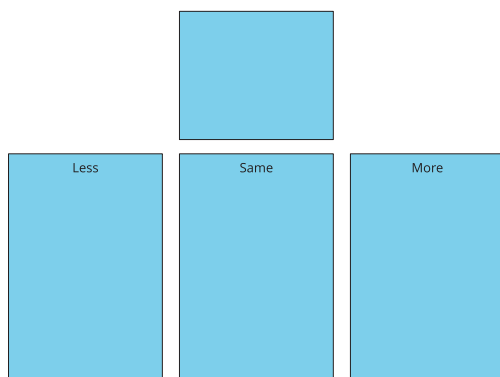
3.




19.3: Centers: Choice Time

Choose a center.

Less, Same, More



Math Libs



Number Race



