

Grade 2 Unit 1

Lesson 15

CC BY 2021 Illustrative Mathematics®

Unit 1 Lesson 15: Diagrams with All Kinds of Compare Problems

WU Number Talk: 10 and Some More (Warm up)

Student Task Statement

Find the value of each sum mentally.

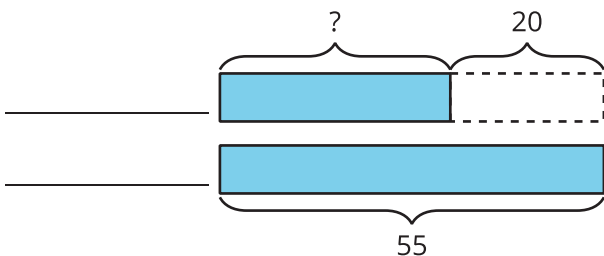
- $4 + 8 + 2$
- $4 + 5 + 3 + 2$
- $9 + 3 + 1$
- $9 + 5$

1 Shell Collections

Student Task Statement

Diego has 55 shells. Lin has 20 fewer shells than Diego.

1. Use the story problem to complete the diagram.



2. Write an equation to show how you could find the unknown number of shells. Use a question mark to represent the unknown.



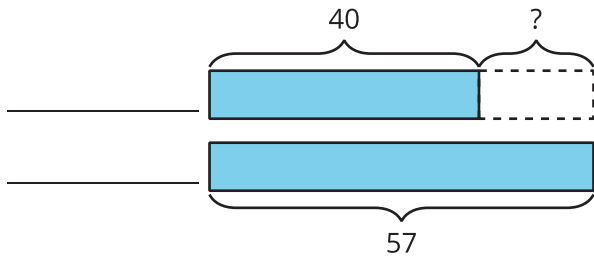
2 Card Sort: At the Beach

Student Task Statement

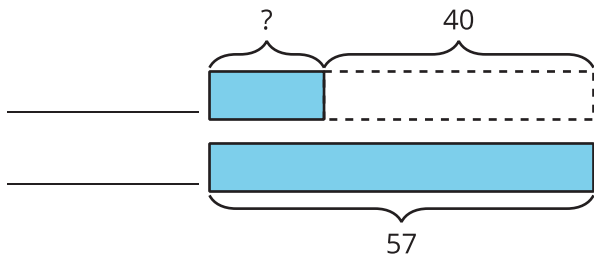
1. Read a card with a story problem.
2. Find cards that match the story problem.
3. Explain why the cards match.

Images for Activity Synthesis

H



J



L

