



# Compare 2-Digit Numbers Shown in Different Ways

Let's compare numbers.



## Warm-up

### Number Talk: Addition within 20

Find the value of each expression mentally.

- $10 + 6$

- $9 + 6$

- $10 + 7$

- $8 + 7$



## Activity 1

### Elena and Kiran Compare Collections

Elena and Kiran are comparing their collections.

Elena says, "I have 5 tens 32 ones."

Kiran says, "I have 7 tens 2 ones."

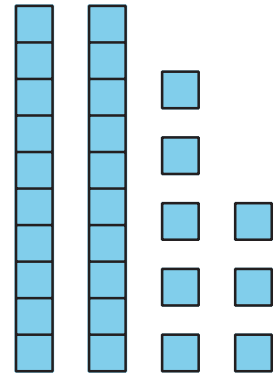
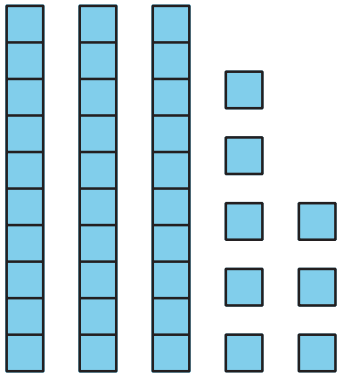
Who has more in their collection?

Show your thinking using drawings, numbers, words, or expressions.

## Activity 2

### Base-Ten Representation Compare

1. What do you notice?



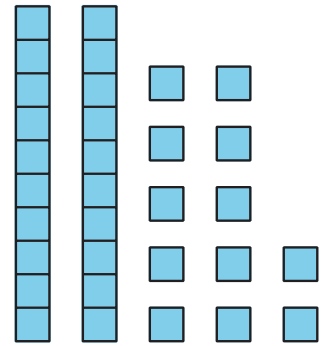
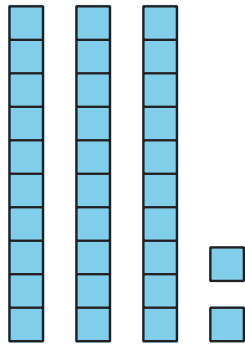
--	--

2. Circle the representation that shows the greater number.

Write a number to match each representation.

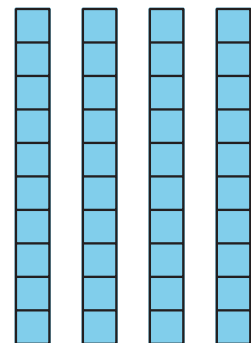
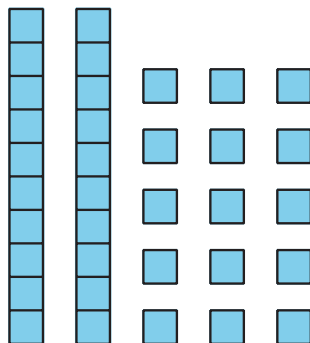
Then write a comparison statement using  $<$ ,  $>$ , or  $=$ .

a.



--	--

b.



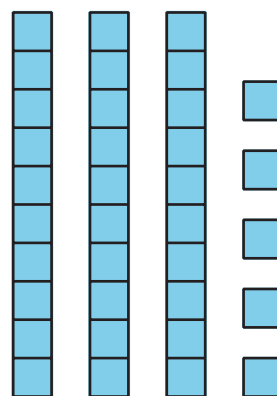
--	--

c. 5 tens 2 ones

12 ones 3 tens

--	--

d. 1 ten 25 ones



--	--

e. 7 tens 29 ones

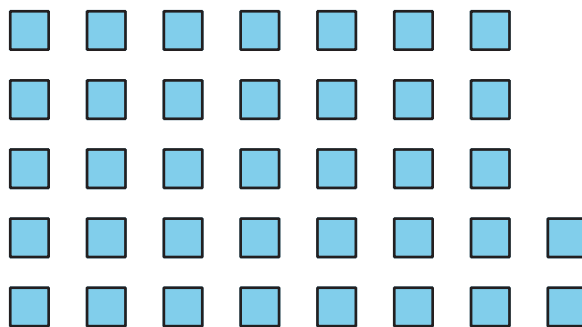

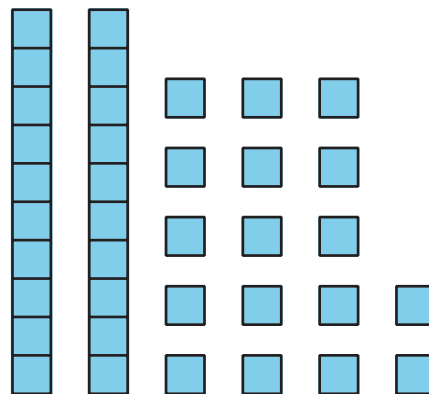
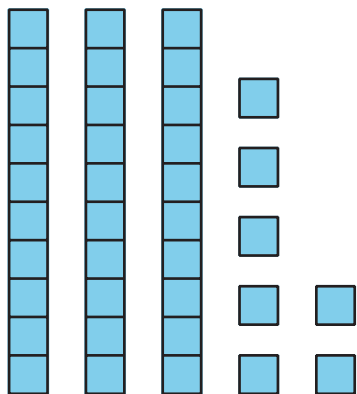
$50 + 39$

--	--

## Section D Summary

We made 2-digit numbers with different amounts of tens and ones.

Each of these representations shows 37.



We compared 2-digit numbers that were made with tens and ones in different ways.

5 tens 2 ones and 12 ones 3 tens

$$52 > 42$$