



Center Day 1

Let's add and subtract.

Warm-up

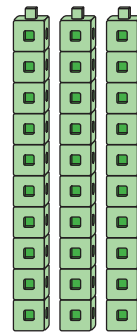
Which Three Go Together: Tens

Which 3 go together?

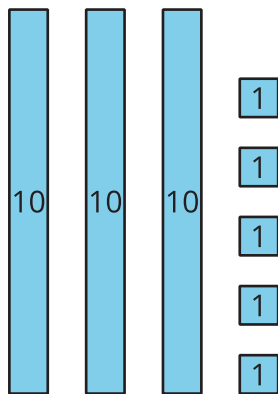
A

$$|0 + |0 + |0$$

B



C



D


30

Activity 2

Centers: Choice Time

Choose a center.

Five in a Row



How Close?

$$\square \square + \square \square = \underline{\hspace{2cm}}$$

Number Puzzles

$$14 = 8 + \square$$