



# Expressions and Drawings

Let's match expressions to drawings.

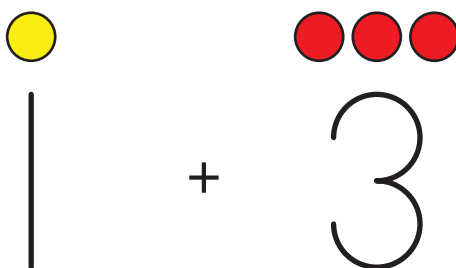


## Warm-up

### Notice and Wonder: Shapes and Numbers

What do you notice?

What do you wonder?



## Activity 1

### Match Drawings to Expressions



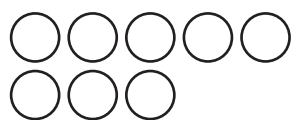
$9 - 2$



$6 - 3$



$4 + 2$



$6 + 3$



$5 + 3$



$7 + 0$

## Activity 2

### Create Expressions and Drawings

Fill in what's missing.

$4 + 3$



$4 - 0$

---

$\underline{\quad} - \underline{\quad}$



$5 + 3$

---



Fill in what's missing.

$8 - 2$

---

$\underline{\hspace{1cm}} + \underline{\hspace{1cm}}$



$1 + 6$

---

$\underline{\hspace{1cm}} - \underline{\hspace{1cm}}$



## Activity 3


### Introduce Shake and Spill—Represent

Choose a center.

Shake and Spill



Number Race



Math Stories

