



Add and Subtract within 100

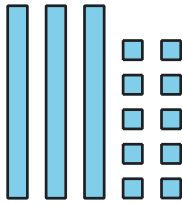
Let's find the difference in our own way.

Warm-up

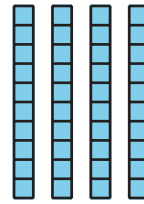
Which Three Go Together: Tens and Ones

Which 3 go together?


A



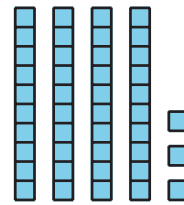
B



C



D



Activity 1

Card Sort: Sort and Find the Value

Your teacher will give you a set of cards that show expressions and diagrams.

1. Match each expression to a diagram. Be ready to explain your reasoning.
2. Choose 1 addition expression. Find the value of the sum.
3. Choose 1 subtraction expression. Find value of the difference.



Activity 2

Add or Subtract

Find the value of each expression. Show your thinking using objects, drawings, numbers, or words.

1. $27 + 47$

2. $55 - 27$



3. $36 + 38$

4. $82 - 39$



Section B Summary

We added two-digit numbers. We **composed** 1 ten by putting 10 ones together. We also subtracted two-digit numbers. We **decomposed** 1 ten by breaking it apart into 10 ones. We used base-ten blocks and base-ten diagrams to show our thinking.

$$63 - 18$$

