



## Ecuaciones que muestran 10

Emparejemos ecuaciones con tableros de 10 y con dedos.

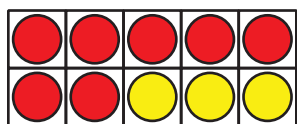


## Calentamiento


### Observa y pregúntate: Expresiones que muestran 10

¿Qué observas?

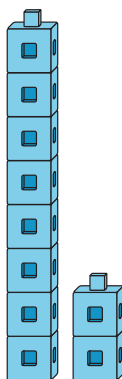
¿Qué te preguntas?



$$7 + 3$$



$$5 + 5$$




$$8 + 2$$

## Actividad 1

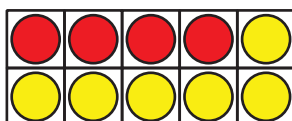
### Emparejemos ecuaciones con tableros de 10

1.



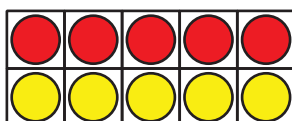
$$10 = 7 + 3$$

2.



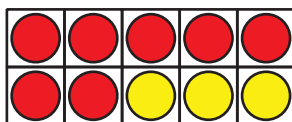
$$10 = 8 + 2$$

3.



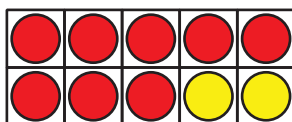
$$10 = 1 + 9$$

4.



$$10 = 4 + 6$$

5.




$$10 = 5 + 5$$


## Actividad 2

### Representemos ecuaciones con dedos


$$10 = 6 + 4$$




$$10 = 9 + 1$$




$$10 = 5 + 5$$




$$10 = 3 + 7$$



$$10 = 8 + 2$$



$$10 = 1 + 9$$




## Actividad 3

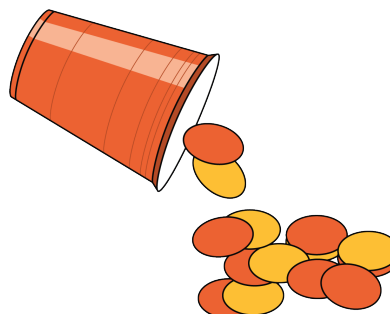
### Centros: Momento de escoger

Escoge un centro.

Contar colecciones



Revuelve y saca



Lanza y suma

