



Formemos 10

Formemos 10.

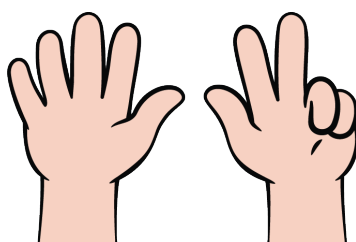




Calentamiento

Cuántos ves: Dedos arriba y abajo

¿Cuántos ves?

¿Cómo lo sabes?, ¿qué ves?



Actividad 2

Formemos 10

3 _____

$10 = \underline{\quad} + \underline{\quad}$

9 _____

$10 = \underline{\quad} + \underline{\quad}$

2 _____

$10 = \underline{\quad} + \underline{\quad}$

5 _____

$10 = \underline{\quad} + \underline{\quad}$



7

$10 = \underline{\quad\quad} + \underline{\quad\quad}$

6

$10 = \underline{\quad\quad} + \underline{\quad\quad}$

8

$10 = \underline{\quad\quad} + \underline{\quad\quad}$

4

$10 = \underline{\quad\quad} + \underline{\quad\quad}$




Actividad 3

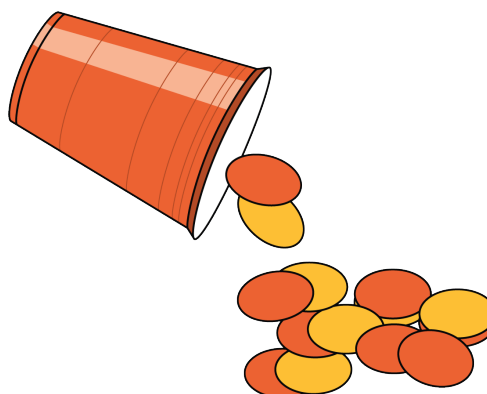
Centros: Momento de escoger

Escoge un centro.


Dedos matemáticos



Revuelve y saca



Contar colecciones



Lanza y suma

