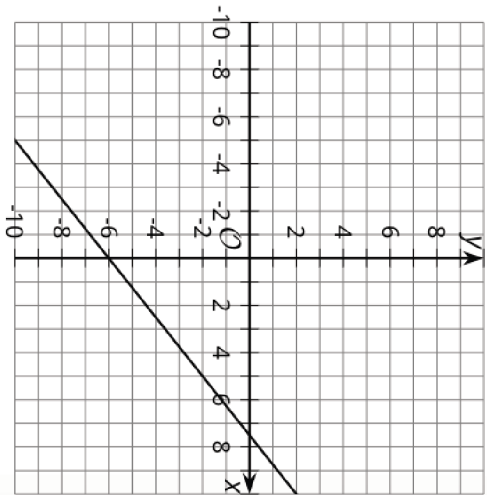
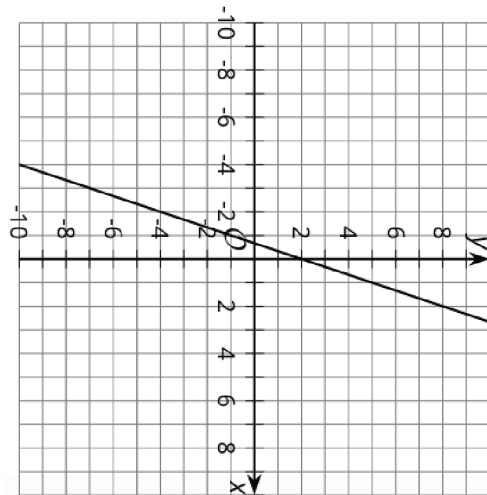


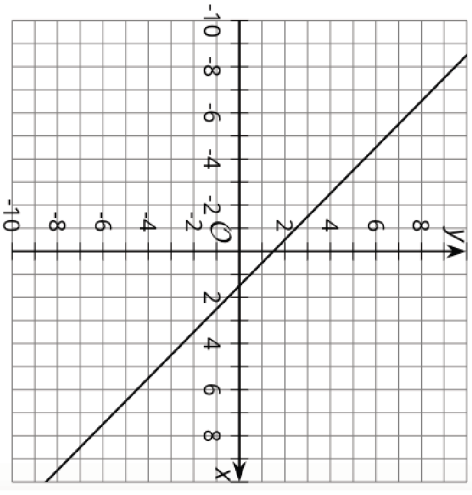
Matching, Matching  
Graph A



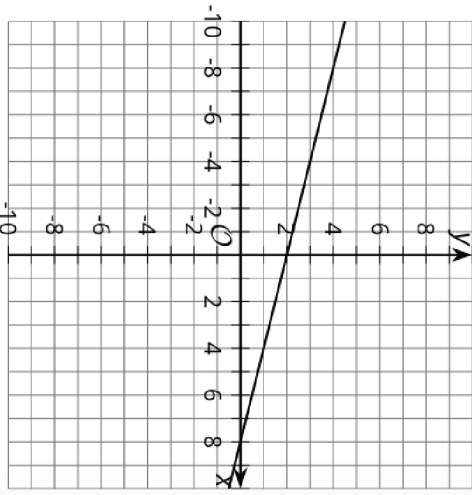
Matching, Matching  
Graph B



Matching, Matching  
Graph C



Matching, Matching  
Graph D



Matching, Matching  
**Equation 1**

$$1.5 = x + y$$

Matching, Matching  
**Equation 2**

$$y = \frac{4}{5}x - 6$$

Matching, Matching  
**Equation 3**

$$y = 3x + 2$$

Matching, Matching  
**Equation 4**

$$2x + 8y = 16$$

Matching, Matching  
**Equation 5**

$$5y - 4x = -30$$

Matching, Matching  
**Equation 6**

$$8 = x + 4y$$