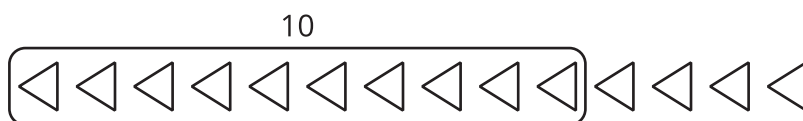


Lesson 11: Count Images (Part 1)

- Let's find 10 shapes and figure out how many shapes there are.

11.1: Find 10 Ones to Count




1.



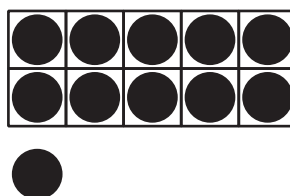
There are _____ squares.

2.



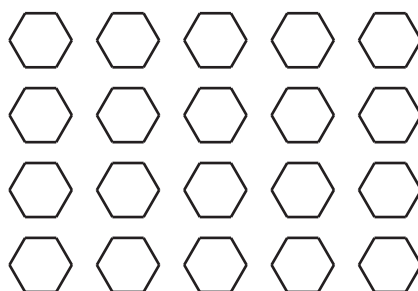
There are _____ rectangles.

3.




There are _____ dots.

4.




There are _____ hexagons.

5.



There are _____ dots.


6.



There are _____ triangles.


11.2: Color to Match Expressions

1. Color the squares to show $10 + 2$.



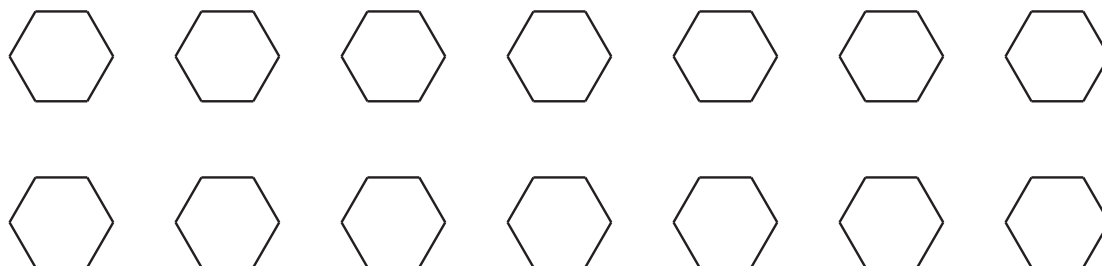
$$10 + 2 = \underline{\hspace{2cm}}$$

2. Color the triangles to show $10 + 8$.



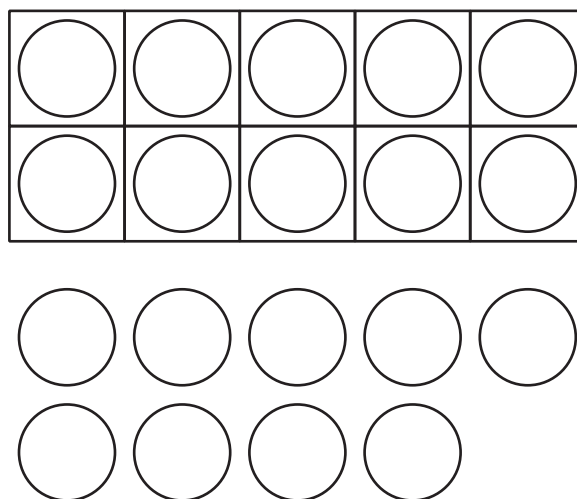
$$10 + 8 = \underline{\hspace{2cm}}$$

3. Color the hexagons to show $10 + 4$.



$$10 + 4 = \underline{\hspace{2cm}}$$

4. Color the circles to show $10 + 9$.



$$10 + 9 = \underline{\hspace{2cm}}$$

11.3: Centers: Choice Time

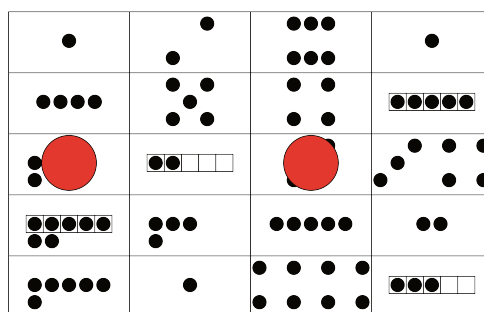
Choose a center.

Find the Value of the Expressions

$3 + 5$

$7 - 5$

Make or Break Apart Numbers



Bingo

