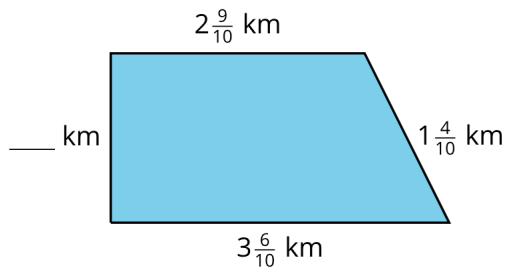


Missing Measurements - Small, Spanish

Missing Measurements, Spanish

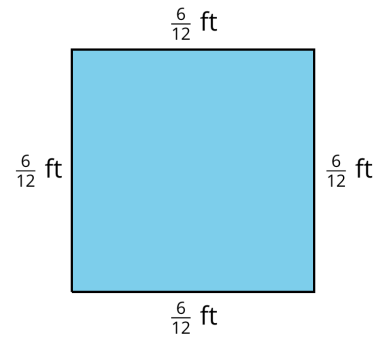
A



Perímetro = 9 km

Missing Measurements, Spanish

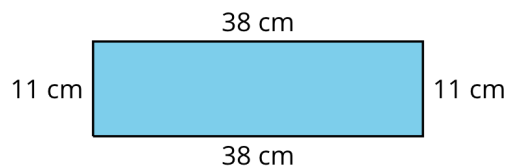
B



Perímetro = _____

Missing Measurements, Spanish

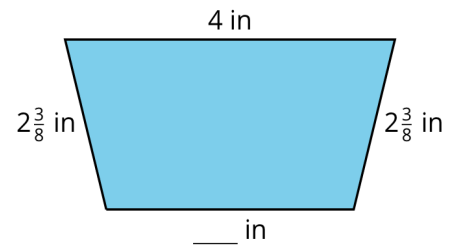
C



Perímetro = _____

Missing Measurements, Spanish

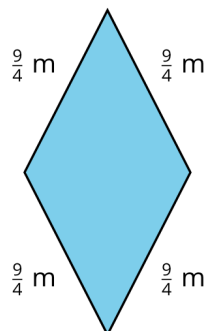
D



Perímetro = 12 in

Missing Measurements, Spanish

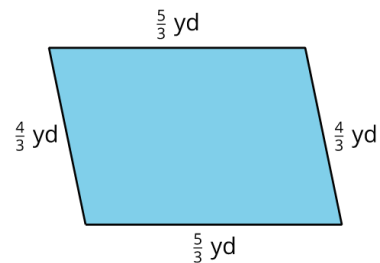
E



Perímetro = _____

Missing Measurements, Spanish

F



Perímetro = _____