




# Expressions and Equations

Let's show 11–19.




## Activity 2

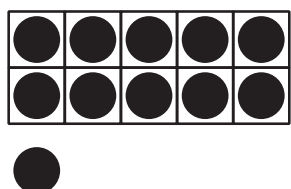
### Equations and 10-Frames




$$10 + 9 = 19$$



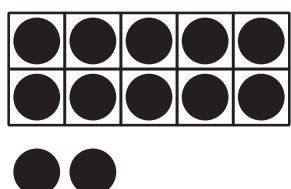
$$10 + 1 = 11$$




$$10 + 4 = 14$$



$$10 + 8 = 18$$



$$10 + 5 = 15$$



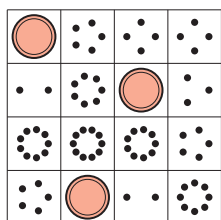
$$10 + 2 = 12$$

## Activity 3


# Introduce Make or Break Apart Numbers—Numbers 11–19

Choose a center.


Bingo



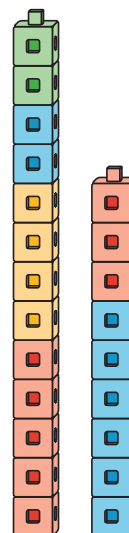
Number Race



Grab and Count



Tower Build



Make or Break Apart Numbers

