



Add and Subtract to Compare

Let's solve Compare problems with greater numbers.

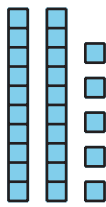


Warm-up

Which Three Go Together: Compare Representations

Which 3 go together?

A

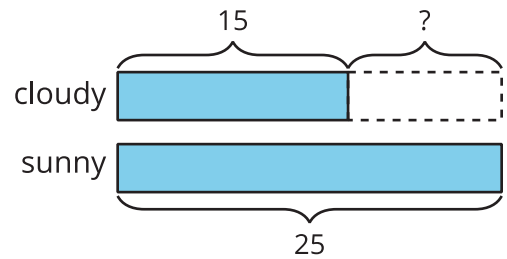


sunny

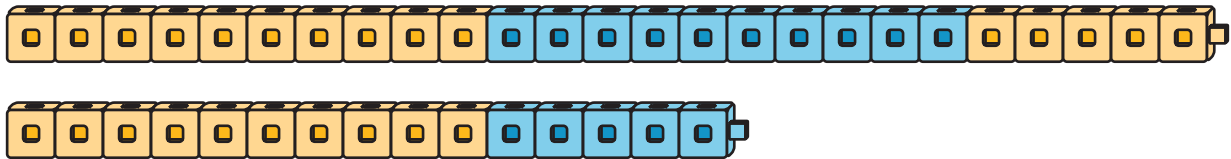


cloudy

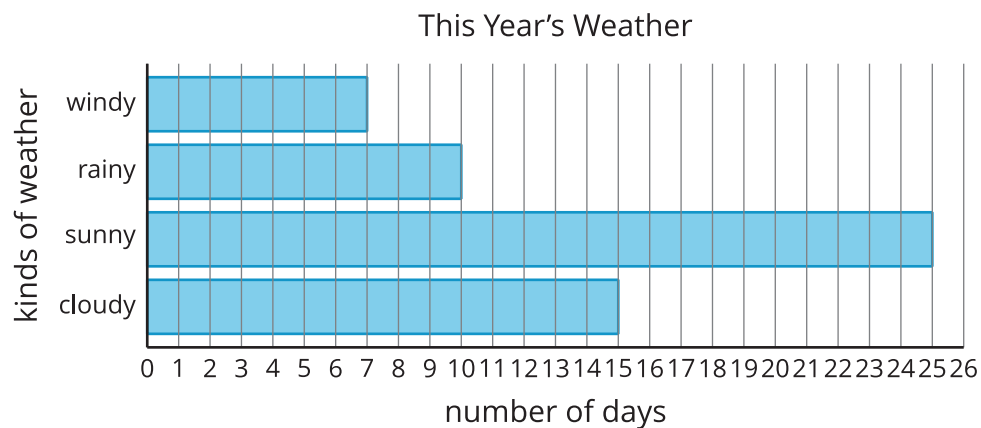
B



C



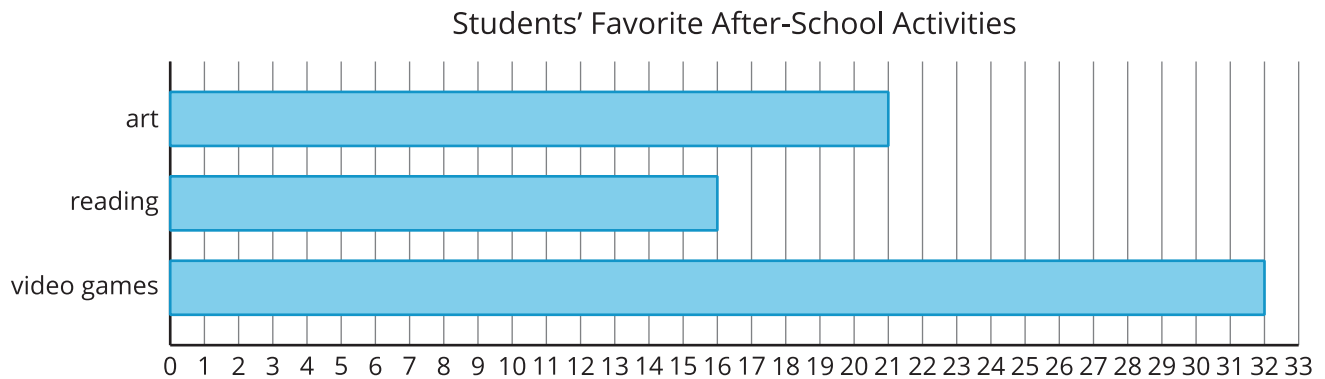
D



Activity 1

After-School Activities

Use the bar graph to answer the questions.



1. How many students chose art or reading? Show your thinking using drawings, numbers, or words.

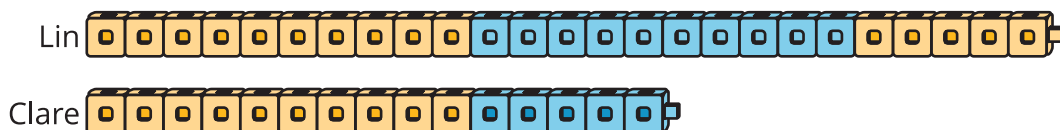
2. How many more students chose video games than art?



Activity 2

Build and Compare

1. Lin and Clare make cube trains. What do you notice? What do you wonder?



2. Make cube trains.

partner	number of cubes
Partner A	46
Partner B	22

3. Find the total number of cubes you both used. Show your thinking using drawings, numbers, or words.

4. Find the difference between the number of cubes you each used. Show your thinking using drawings, numbers, or words.