

Representations of Tens
A

1 ten

Representations of Tens
B

2 tens

Representations of Tens
C

3 tens

Representations of Tens
D

4 tens

E
Representations of Tens

5 tens

F
Representations of Tens

6 tens

G
Representations of Tens

7 tens

H
Representations of Tens

8 tens

I
Representations of Tens

9 tens

J
Representations of Tens

10

K
Representations of Tens

20

L
Representations of Tens

30

Representations of Tens
M

40

Representations of Tens
N

50

Representations of Tens
O

60

Representations of Tens
P

70

Q
Representations of Tens

80

R
Representations of Tens

90


S
Representations of Tens




T
Representations of Tens




U
Representations of Tens




W
Representations of Tens



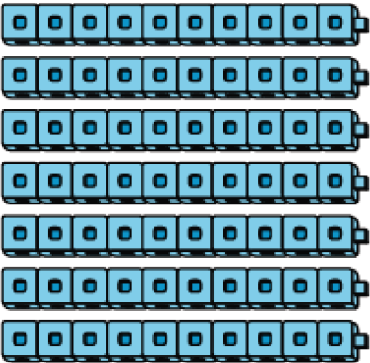
V
Representations of Tens




X
Representations of Tens




Representations of Tens
Y



Representations of Tens
AA



Representations of Tens
Z




Match each picture to the number and words that show the same amount.

30
thirty



7 tens

50
fifty




5 tens

20
twenty




1 ten

60
sixty




4 tens

10
ten



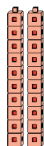
8 tens

80
eighty




3 tens

40
forty




9 tens

70
seventy



2 tens

90
ninety



6 tens