



Make 10 to Add

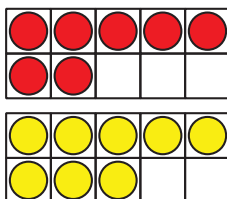
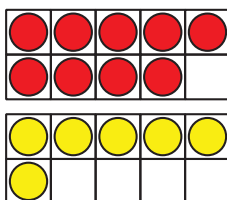
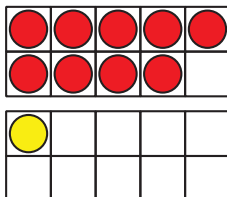
Let's look for patterns and think about making 10 as we add.

Warm-up

How Many Do You See: Double 10-frames

How many do you see?

How do you see them?



Activity 1

The 9 Plus Game

- Put out 9 counters.
- Pick a number card and add that many counters.
- Write an equation to represent the counters.

Can you write more than 1?

Equations:

Round 1: _____

Round 2: _____

Round 3: _____

Round 4: _____

Round 5: _____



Activity 2

Clare's Birds

1. Clare draws some birds.

She draws 3 birds in a nest and 9 birds flying.

How many birds did she draw?

Show your thinking using drawings, numbers, or words.

2. Clare draws birds that like warm weather.

She draws 6 toucans and 8 parrots.

How many birds did she draw?

Show your thinking using drawings, numbers, or words.

3. Clare draws birds that like cold weather.
She draws 7 penguins and 5 owls.
How many birds did she draw?
Show your thinking using drawings, numbers,
or words.

