



Half of the Clock

Let's learn more about time to the half hour.

Warm-up

Number Talk: Work with 30

Find the value of each expression mentally.

- $30 + 10$

- $30 + 15$

- $30 + 30$

- $30 + 35$

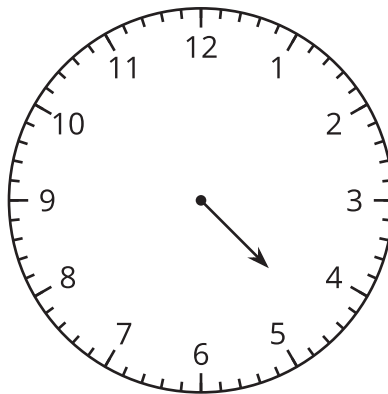
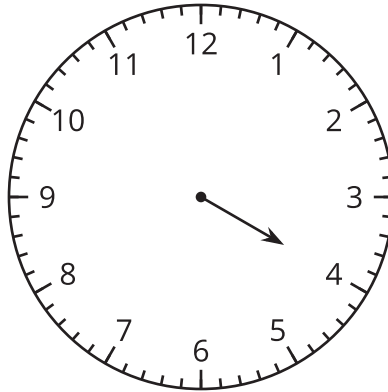


Activity 1

Put Times in Order

What do you notice?

What do you wonder?



Activity 2

Half Past What?

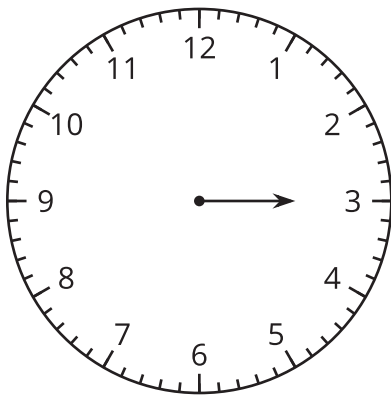
What time is shown on each clock?

- If the time is **half past**, color the clock red.
- If the time is **o'clock**, color the clock blue.

For the first 2 clocks, circle the time.

For the rest of the clocks, write the time. Use “o'clock” or “half past.”

1.

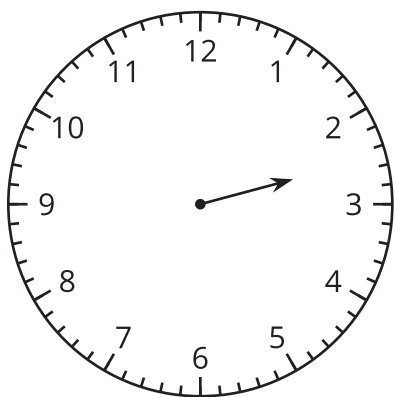


half past 2

3 o'clock

half past 3

2.

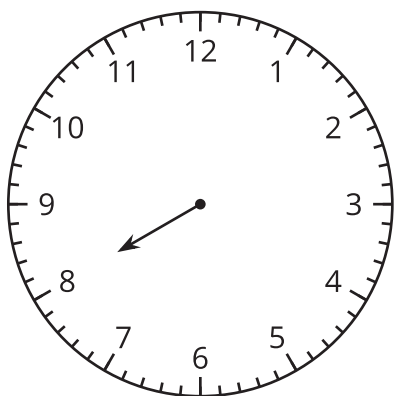


half past 2

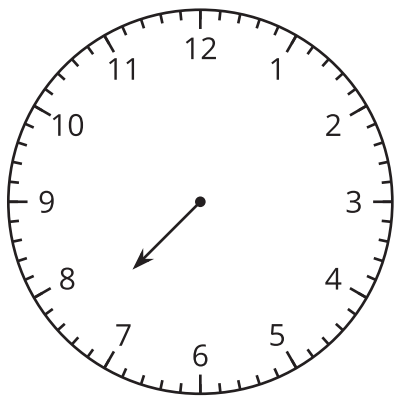
3 o'clock

half past 3

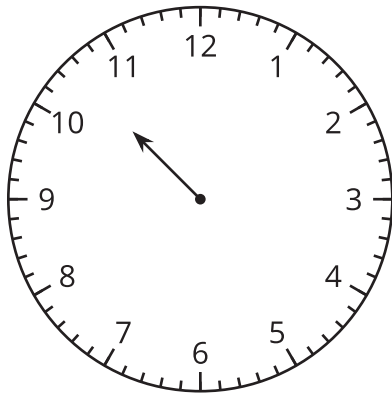
3.



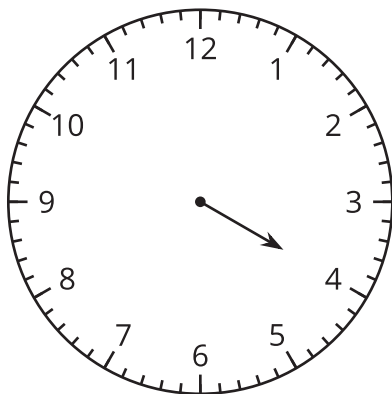
4.



5.



6.





Activity 3

Notice and Wonder: The Hands on the Clock Go Round and Round

What do you notice?

What do you wonder?

