

Card Sort: Spaghetti Sauce

Diagram A



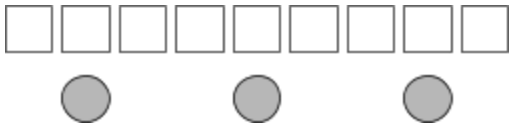
Card Sort: Spaghetti Sauce

Sentence 4

There are 3 cups of tomato sauce for every tablespoon of oil.

Card Sort: Spaghetti Sauce

Diagram B



Card Sort: Spaghetti Sauce

Sentence 2

There are 3 tablespoons of oil for every cup of tomato sauce.

The above diagram also matches this sentence.

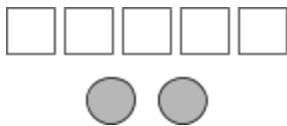
Card Sort: Spaghetti Sauce

Sentence 8

The ratio of cups of tomato sauce to tablespoons of oil is 1 : 3.

Card Sort: Spaghetti Sauce

Diagram C



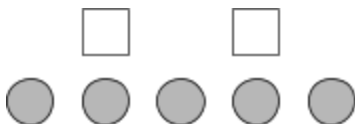
Card Sort: Spaghetti Sauce

Sentence 1

The ratio of tablespoons of oil to cups of tomato sauce is 5 to 2.

Card Sort: Spaghetti Sauce

Diagram D



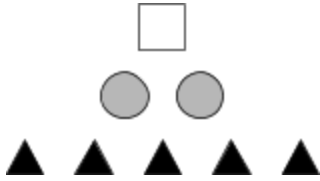
Card Sort: Spaghetti Sauce

Sentence 5

The ratio of cups of tomato sauce to tablespoons of oil is 5 to 2.

Card Sort: Spaghetti Sauce

Diagram E



Card Sort: Spaghetti Sauce

Sentence 3

For every tablespoon of oil, there are 2 cups of tomato sauce and 5 teaspoons of oregano.

The above diagram also matches this sentence.

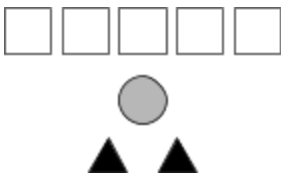
Card Sort: Spaghetti Sauce

Sentence 7

Tablespoons of oil, teaspoons of oregano, and cups of tomato sauce are in the ratio 1 : 5 : 2.

Card Sort: Spaghetti Sauce

Diagram F



Card Sort: Spaghetti Sauce

Sentence 6

Cups of tomato sauce, tablespoons of oil, and teaspoons of oregano are in the ratio 1 : 5 : 2.