



Graphs, Tables, Equations, and Situations, Spanish

## Tarjeta 7

Mai tiene un negocio de quitar nieve. Ella cobra una tarifa fija de \$50 durante el invierno y \$5 adicionales si la nieve que debe quitar mide más de 6 pulgadas.

Llamemos  $x$  al número de nevadas que miden más de 6 pulgadas y llamemos  $y$  al costo de contratar a Mai, en dólares.

Graphs, Tables, Equations, and Situations, Spanish

## Tarjeta 8

Priya usa 20 metros de cerca para hacer un gallinero rectangular. Va a usar la cerca en los 4 lados del gallinero.

Llamemos  $x$  al largo del gallinero, en metros, y  $y$  al ancho del gallinero, en metros.

Graphs, Tables, Equations, and Situations, Spanish

## Tarjeta 9

$x$	$y$
20	30
12	18
67.6	101.4

Graphs, Tables, Equations, and Situations, Spanish

## Tarjeta 10

$x$	$y$
2	6
4	2
5	0

Graphs, Tables, Equations, and Situations, Spanish

## Tarjeta 11

$x$	$y$
6	3.60
10	6.00
12	7.20

Graphs, Tables, Equations, and Situations, Spanish

## Tarjeta 12

$x$	$y$
3	3
2.5	2.5
3.2	3.2

Graphs, Tables, Equations, and Situations, Spanish

## Tarjeta 13

$x$	$y$
5	5
4	6
3	7

Graphs, Tables, Equations, and Situations, Spanish

## Tarjeta 14

$x$	$y$
0	50
2	60
5	75

Graphs, Tables, Equations, and Situations, Spanish

## Tarjeta 15

$x$	$y$
0	50
2	40
7	15

Graphs, Tables, Equations, and Situations, Spanish

## Tarjeta 16

$x$	$y$
0	15
7	8
10	5

Graphs, Tables, Equations, and Situations, Spanish

## Tarjeta 17

$$2x + 2y = 20$$

Graphs, Tables, Equations, and Situations, Spanish

## Tarjeta 18

$$y = 15 - x$$

Graphs, Tables, Equations, and Situations, Spanish

## Tarjeta 19

$$y = 5x + 50$$

Graphs, Tables, Equations, and Situations, Spanish

## Tarjeta 20

$$y = 0.60x$$

Graphs, Tables, Equations, and Situations, Spanish

## Tarjeta 21

$$2x + 1y = 10$$

Graphs, Tables, Equations, and Situations, Spanish

## Tarjeta 22

$$y = \frac{60x}{60}$$

Graphs, Tables, Equations, and Situations, Spanish

## Tarjeta 23

$$1.5x = y$$

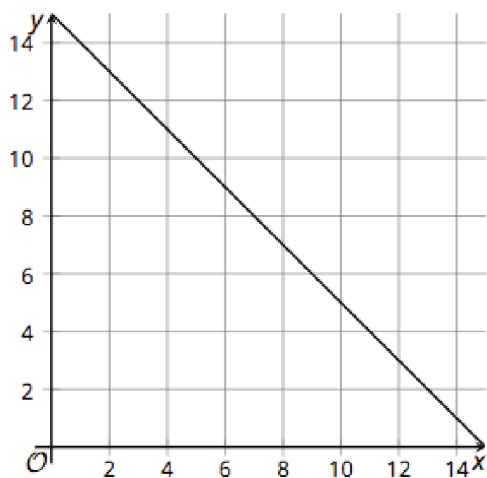
Graphs, Tables, Equations, and Situations, Spanish

## Tarjeta 24

$$50 - 5x = y$$

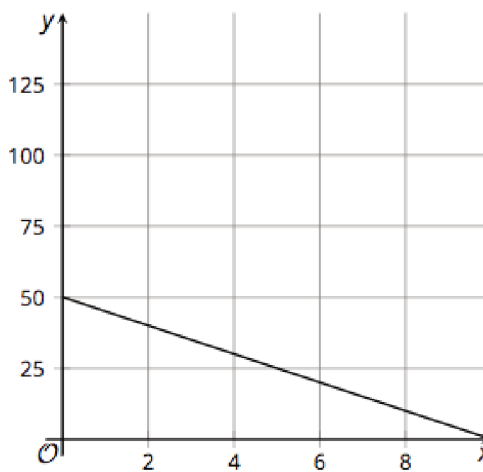
Graphs, Tables, Equations, and Situations, Spanish

## Tarjeta 25



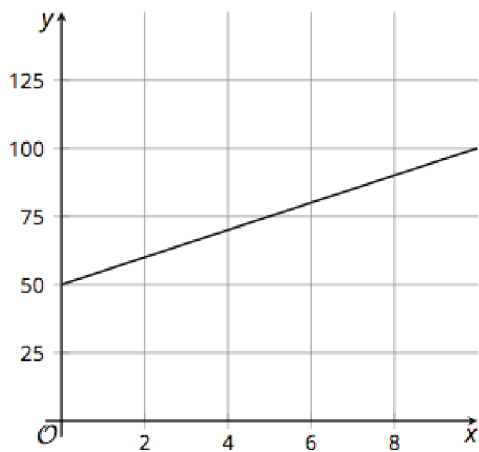
Graphs, Tables, Equations, and Situations, Spanish

## Tarjeta 26



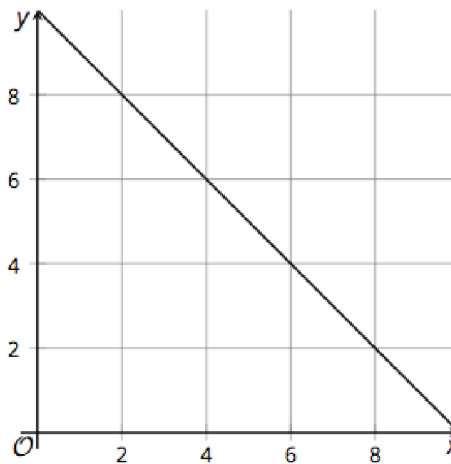
Graphs, Tables, Equations, and Situations, Spanish

## Tarjeta 27

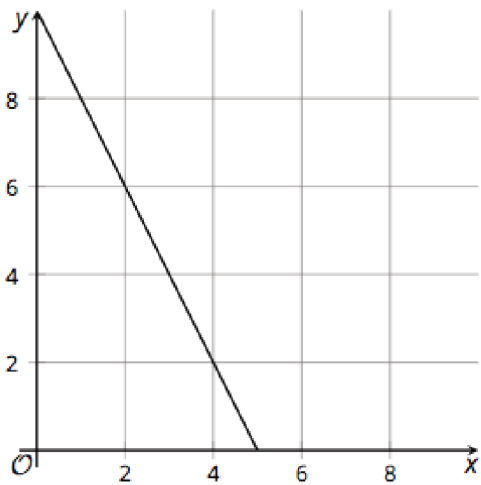


Graphs, Tables, Equations, and Situations, Spanish

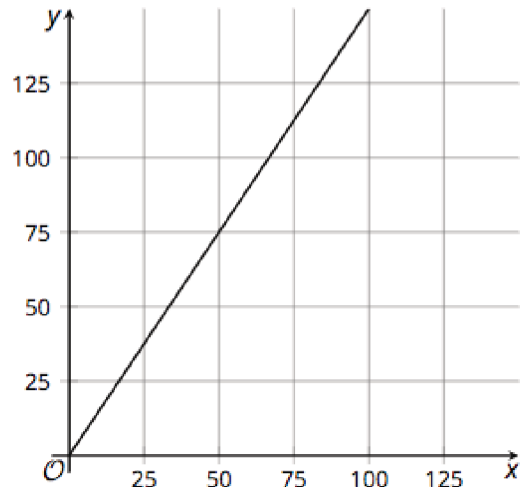
## Tarjeta 28



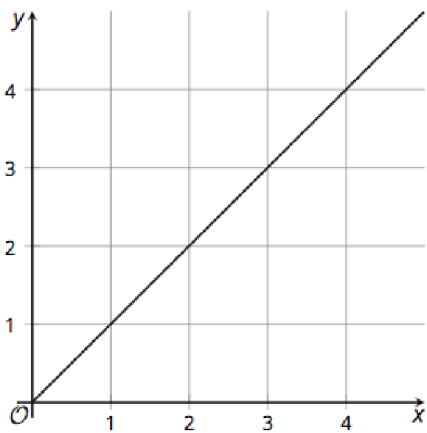
Graphs, Tables, Equations, and Situations, Spanish  
Tarjeta 29



Graphs, Tables, Equations, and Situations, Spanish  
Tarjeta 30



Graphs, Tables, Equations, and Situations, Spanish  
Tarjeta 31



Graphs, Tables, Equations, and Situations, Spanish  
Tarjeta 32

