

# Subtract Your Way

Let's subtract numbers within 1,000.

## Warm-up

### Number Talk: Subtract Two-Digit Numbers

Find the value of each expression mentally.

- $50 - 10$

- $58 - 10$

- $258 - 20$

- $258 - 24$



## Activity 1

### Strategies to Subtract

Find the value of each difference in any way that makes sense to you. Explain or show your reasoning.

1.  $428 - 213$

2.  $505 - 398$

3.  $394 - 127$

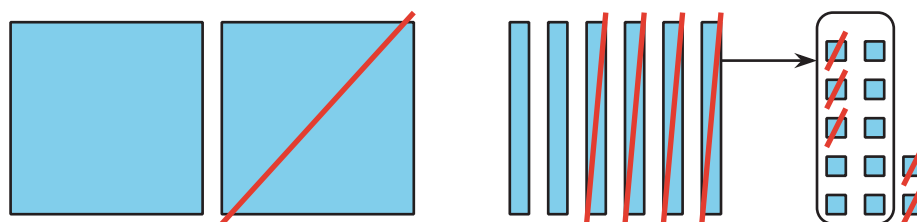


## Activity 2

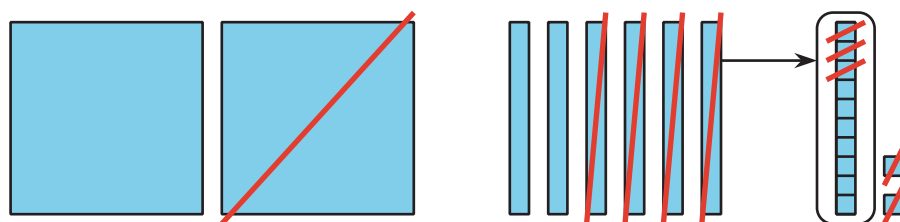
### Base-Ten Drawings

1. Jada and Han made drawings to show how they used base-ten blocks to find the value of  $262 - 135$ .

Jada's drawing



Han's drawing



How are their drawings alike? How are they different?

---

---

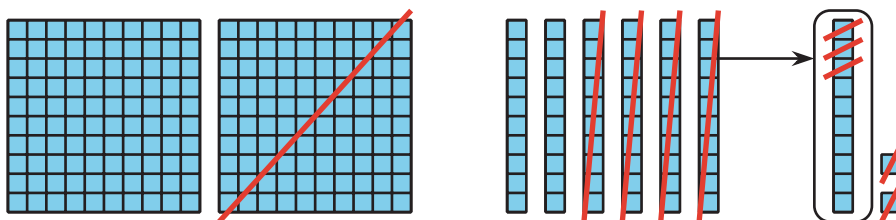
2. Here are 3 expressions, followed by 3 diagrams. Write each expression next to the diagram that represents it. Then find the value of each expression.

$$252 - 181$$

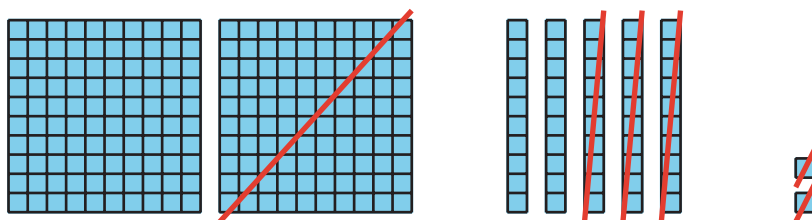
$$262 - 135$$

$$252 - 132$$

a.



b.



c.

