

**Kindergarten Unit 4**

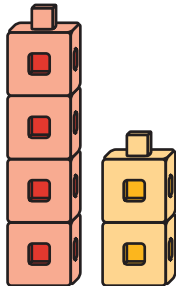

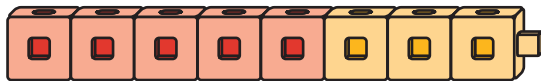
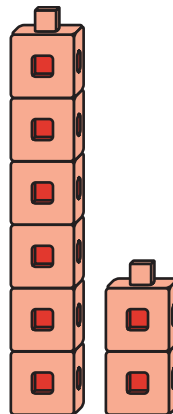
## Lesson 1

CC BY 2021 Illustrative Mathematics®

**Unit 4 Lesson 1: Count 2 Groups of Objects****WU Which One Doesn't Belong: Groups (Warm up)**

## Student Task Statement

Which one doesn't belong?

**A****B****C****D****1 Put Together Pattern Blocks**

## Student Task Statement

How many pattern blocks do you have?

---

I have \_\_\_\_\_ pattern blocks.

---

## 2 Put Together Connecting Cubes

### Student Task Statement

How many cubes do you and your partner have together?

\_\_\_\_\_

We have \_\_\_\_\_ cubes.

---

\_\_\_\_\_

We have \_\_\_\_\_ cubes.

---

## 3 Centers: Choice Time

### Student Task Statement

Choose a center.


Math Libs



---

---

---



---

---

---



---

---

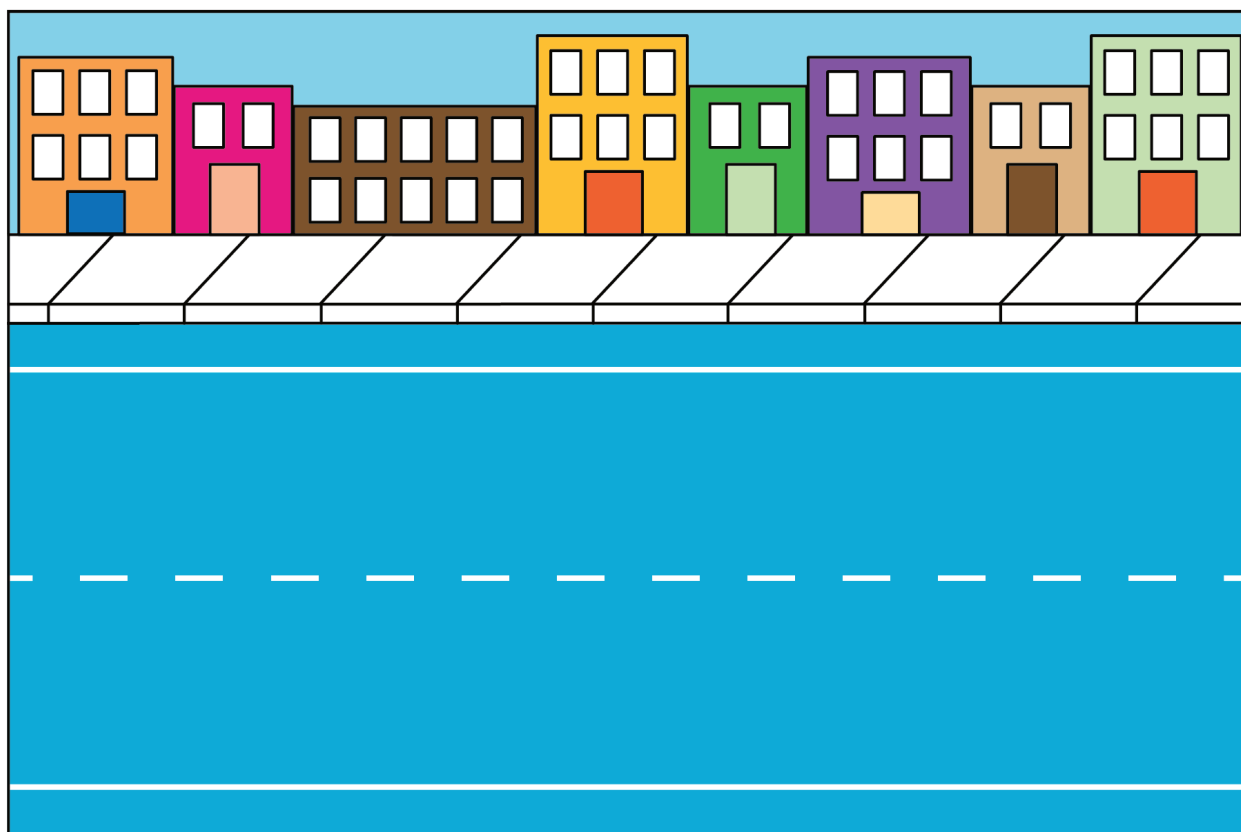
---



---

---

---



Match Mine

