



Problems about Pets

Let's compare different ways to solve problems.

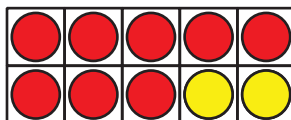
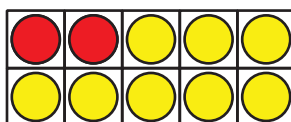
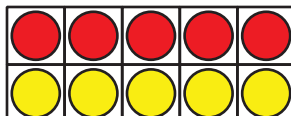


Warm-up

How Many Do You See: Two-color Counters

How many do you see?

How do you see them?



Activity 1

Three Reads: Kiran's Fish

Kiran has some fish in his fish tank.

He has 4 red fish and 5 blue fish.

How many fish does he have in all?

Show your thinking using drawings, numbers, or words.



Activity 2

Tyler's and Clare's Pets

Tyler and Clare want to know how many pets they have together.

Tyler has 2 turtles.

Clare has 4 dogs.

Tyler writes $2 + 4$.

Clare writes $4 + 2$.

Who do you agree with?

Show your thinking using objects, drawings, numbers, or words.

