



Write 2-Digit Numbers

Let's write 2-digit numbers.



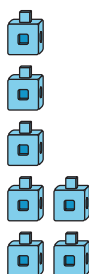
Warm-up

Notice and Wonder: Same Digit, Different Place

What do you notice?


What do you wonder?

A



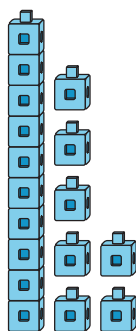
7

B




70

C



17

D



71

Activity 1

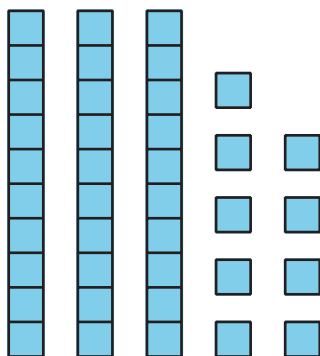
Write Numbers to Match Base-Ten Representations

Write the number that matches each representation.

1. 1 ten 4 ones

Number: _____

2.



Number: _____

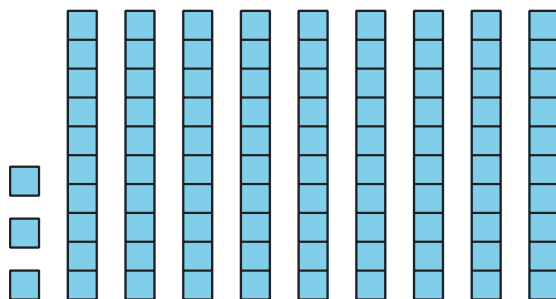
3. 9 tens

Number: _____

4. $20 + 5$

Number: _____

5.



Number: _____

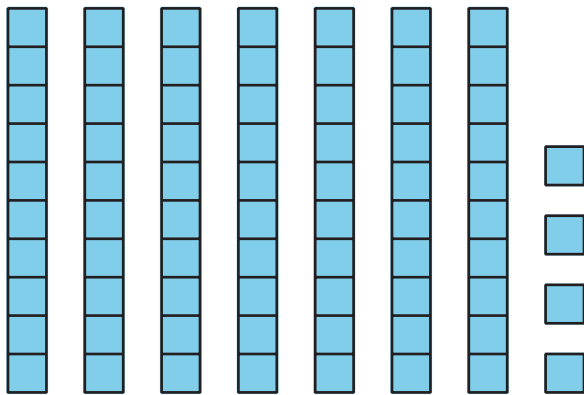
6. $7 + 40$

Number: _____

7. 2 ones 8 tens

Number: _____

8.

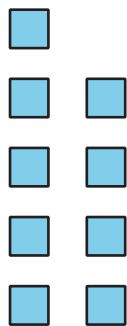


Number: _____

9. $1 + 40$

Number: _____

10.



Number: _____