



Addition and Subtraction with Tens

Let's add and subtract 10.

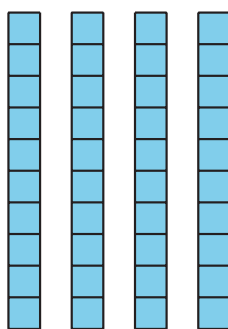
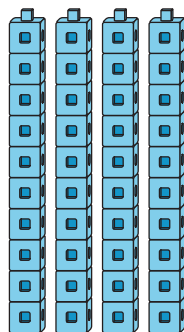
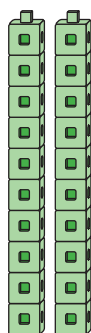


Warm-up

How Many Do You See: Groups of 10

How many do you see?

How do you see them?



Activity 1

How Many Tens Now?

1. Show your thinking using drawings, numbers, or words.

a. Show 1 ten.

Add a ten.

How many do you have now?

b. Add another ten.

How many do you have now?

c. Add another ten.

How many do you have now?

d. Add another ten.

How many do you have now?



e. Add another ten.

How many do you have now?

f. Add another ten.

How many do you have now?



g. Add another ten.

How many do you have now?

h. Add another ten.

How many do you have now?



2. Show your thinking using drawings, numbers, or words.

a. Show 9 tens.

Take away a ten.

How many do you have now?

b. Take away another ten.

How many do you have now?

c. Take away another ten.
How many do you have now?

d. Take away another ten.
How many do you have now?



e. Take away another ten.
How many do you have now?

f. Take away another ten.
How many do you have now?




g. Take away another ten.
How many do you have now?

h. Take away another ten.
How many do you have now?

Activity 2

Introduce Five in a Row—Add or Subtract 10



Record your favorite round.


Show your thinking using drawings, numbers, or words.

Activity 3

Centers: Choice Time

Choose a center.

Five in a Row



How Close?

$$\begin{array}{|c|c|} \hline \square \\ \hline \end{array} \begin{array}{|c|c|} \hline \square \\ \hline \end{array} + \begin{array}{|c|c|} \hline \square \\ \hline \end{array} \begin{array}{|c|c|} \hline \square \\ \hline \end{array} = \underline{\hspace{2cm}}$$

Number Puzzles

$$14 = 8 + \begin{array}{|c|} \hline \square \\ \hline \end{array}$$