



# Constant Speed

Let's use ratios to work with how fast things move.

## 9.1 From Start to Finish at a Constant Speed

Your teacher will time how long it takes a student to move from the start line to the finish line of a path.

1. How many seconds did it take the student to travel from start to finish?
2. Suppose another student also moved along the same path but did it more quickly. How would the amount of time change?
3. In the experiment, the student began moving from a warm-up mark that was before the start line. Why might it be important for the experiment?



9.2

Moving 10 Meters

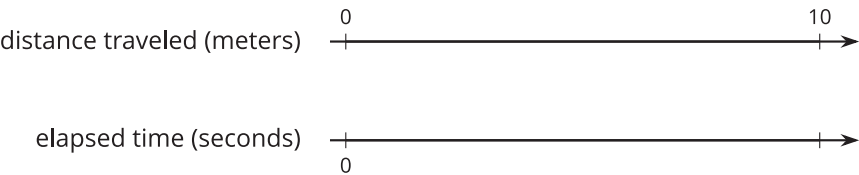
Your teacher has set up a straight path with a 1-meter warm-up zone and a 10-meter measuring zone. Use the path and the following instructions to collect the data.

- 1. a. The person with the stopwatch (the “timer”) stands at the finish line. The person being timed (the “mover”) stands at the warm-up line.
- b. On the first round, the mover starts moving *at a slow, steady speed* along the path. When the mover reaches the start line, the mover says, “Start!” and the timer starts the stopwatch.
- c. The mover keeps moving steadily along the path. When the mover reaches the finish line, the timer stops the stopwatch and records the time, rounded to the nearest second, in the table.
- d. On the second round, the mover follows the same instructions, but this time, moving *at a quick, steady speed*. The timer records the time the same way.
- e. Repeat these steps until each person in the group has gone twice: once at a slow, steady speed, and once at a quick, steady speed.

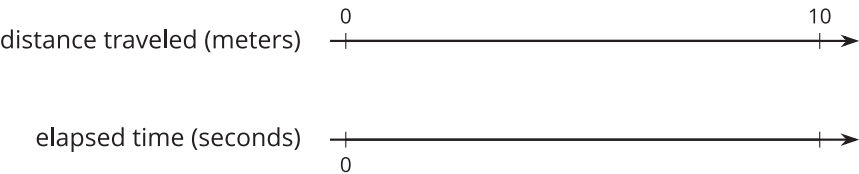
your slow moving time (seconds)	your fast moving time (seconds)

- 2. After you finish collecting the data, use the double number line diagrams to answer the questions. Use the times that your partner recorded when you were the person moving.

Moving slowly:



Moving quickly:



- a. Estimate the distance in meters that you traveled in 1 second when moving slowly.
- b. Estimate the distance in meters that you traveled in 1 second when moving quickly.
- c. How is the diagram that represents you moving slowly different from the diagram that represents you moving quickly?



### 9.3

## Moving for 10 Seconds

Lin and Diego both ran for 10 seconds, each at their own constant speed. Lin ran 40 meters and Diego ran 55 meters.

1. Who was moving faster? Explain your reasoning.
2. How far did each person move in 1 second? If you get stuck, consider drawing double number line diagrams to represent the situations.
3. Use your data from the previous activity to find how far *you* could travel in 10 seconds at your quicker speed.
4. Han ran 100 meters in 20 seconds at a constant speed. Is this speed faster, slower, or the same as Lin's? Diego's? Yours?



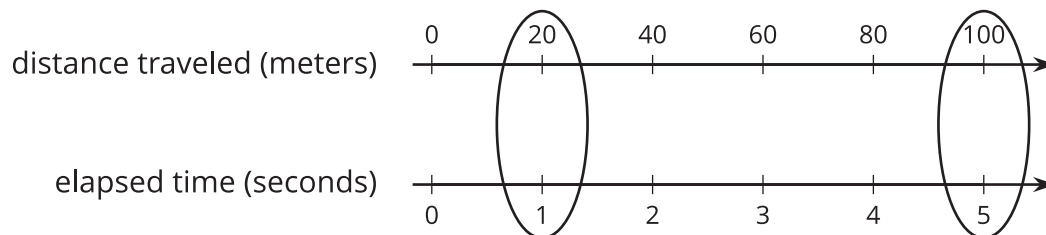
## Are you ready for more?

Lin and Diego want to run a race in which they will both finish when the timer reads exactly 30 seconds. Who should get a head start, and how long should the head start be?

## Lesson 9 Summary

Suppose a train traveled 100 meters in 5 seconds at a **constant speed**, or at the same speed at all times.

To find its speed in meters per second, we can create a double number line:



The double number line shows that the train's speed was 20 meters per second.

We can also find the speed by dividing:  $100 \div 5 = 20$ .

Once we know the speed in meters per second, many questions about the situation become simpler to answer because we can multiply the amount of time an object travels by its speed to get the distance. For example, at this rate, how far would the train go in 30 seconds? Because  $20 \cdot 30 = 600$ , the train would go 600 meters in 30 seconds.