



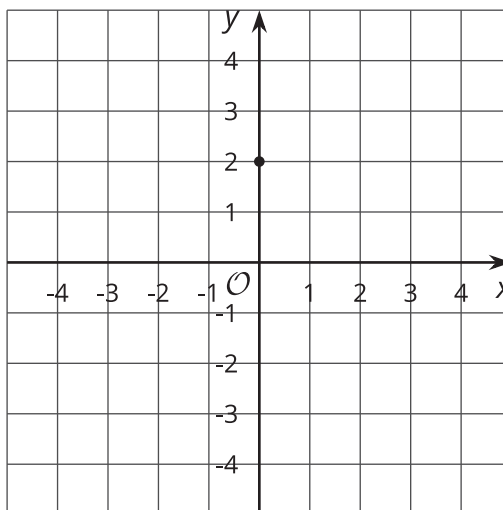
Graphs, Tables, and Equations

Let's connect different representations.

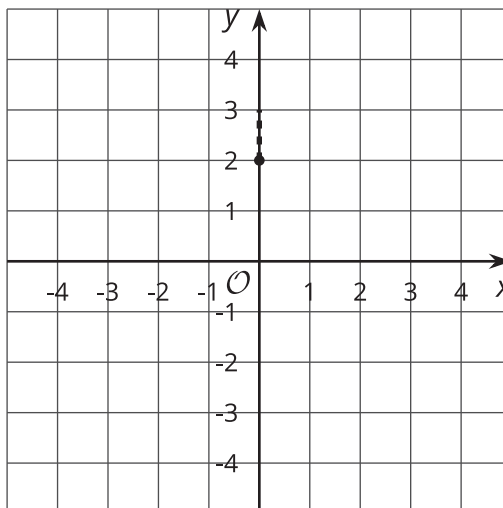
5.1 Worked Example: Graphing Linear Equations

Graph the equation $y = \frac{1}{3}x + 2$.

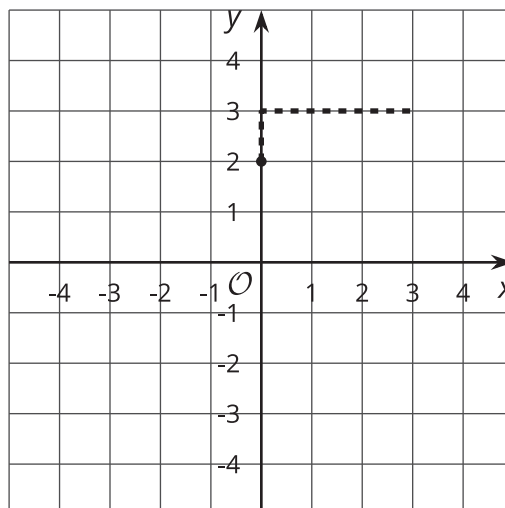
Step 1:



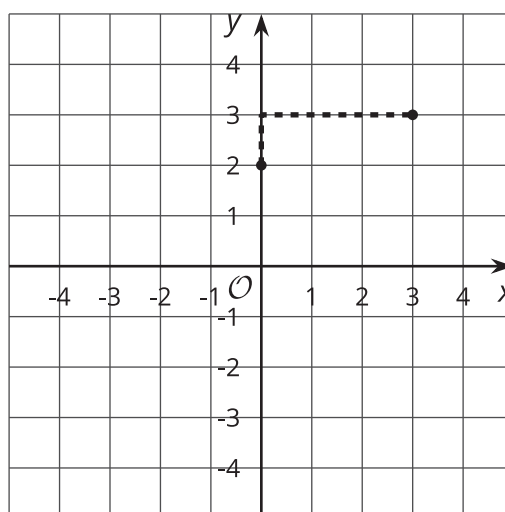
Step 2:



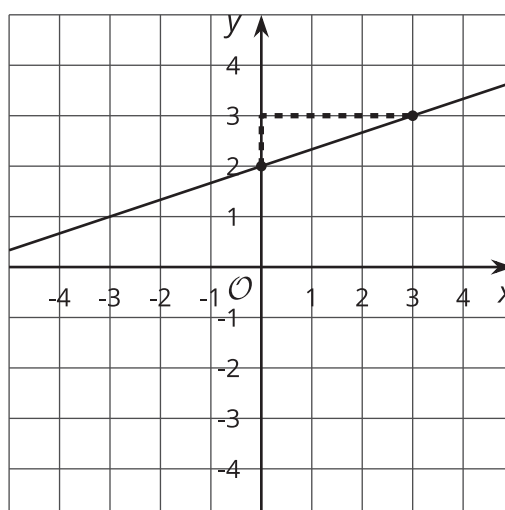
Step 3:



Step 4:

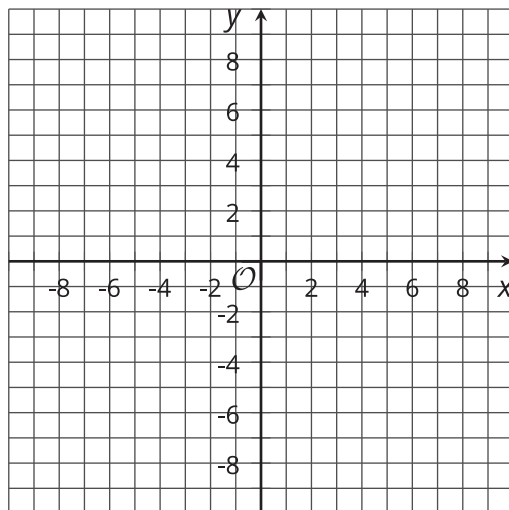
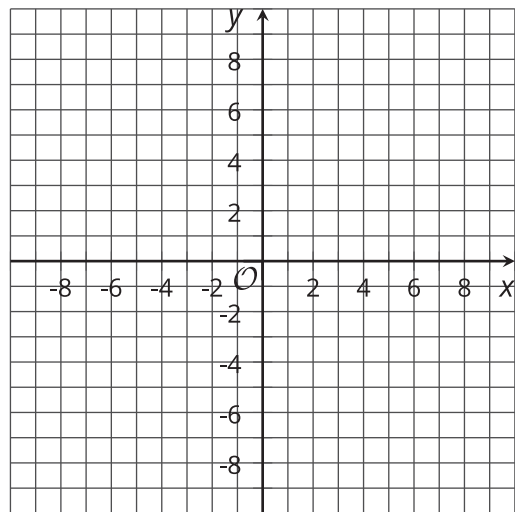
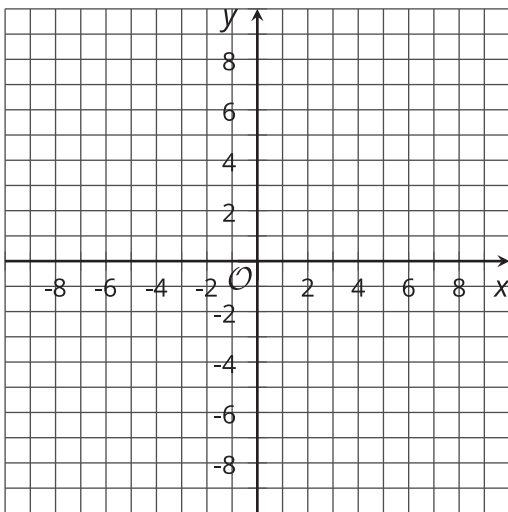


Step 5:



5.2 On the Line

- Sketch a graph representing each of these equations.
 - $y = 2x$
 - $y = \frac{1}{2}x$
 - $y = x + 2$
- For each point, which graph or graphs is it on? How can you tell by using the equation?
 - $(1, 3)$
 - $(0, 0)$
 - $(3, 6)$
 - $(3, 1.5)$



5.3

Card Sort: Graphs, Tables, Equations, and Situations

Your teacher will give you a set of cards. Take turns with your partner to match a graph with a set of a situation, equation, and table.

- For each match that you find, explain to your partner how you know it's a match.
- For each match that your partner finds, listen carefully to the explanation. If you disagree, discuss your thinking and work to reach an agreement.



