



# How Many More? How Many Fewer?

Let's find the difference between quantities.

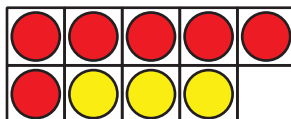
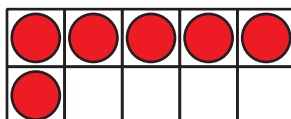
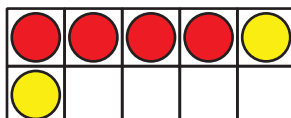
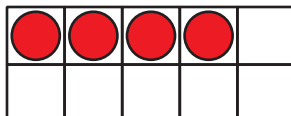


## Warm-up

### How Many Do You See: 10-frames

How many do you see?

How do you see them?



## Activity 1

### Get Out Your Dry Erase Boards


There are 9 dry erase boards.

There are 6 markers.

Are there more dry erase boards or more markers?

How many more?

Show your thinking using drawings, numbers, or words.



## Activity 2

### Compare Problems

1. There are 7 folders.

There are 9 pens.

Are there fewer folders or pens?

How many fewer?

Show your thinking using drawings, numbers, or words.

2. There are 5 pencils.

There are 8 markers.

Are there more pencils or markers?

How many more?

Show your thinking using objects, drawings, numbers, or words.

