

Sales Tax

Markup

Interest

Gratuity (Tip)

Markdown (Discount)

Commission

Card Sort: Percentage Situations

Kiran ate breakfast at a café. The total check was \$5. Here is the money he left.



Why did he pay \$5.75?

Card Sort: Percentage Situations

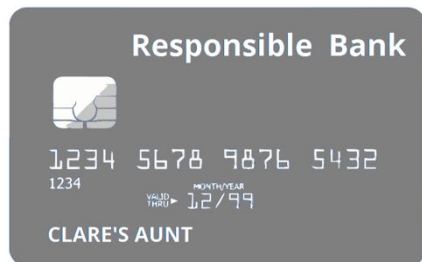
Tyler bought a shirt from the 25% off rack. It normally costs \$16. Here is the money he paid.



Why did he pay \$12?

Card Sort: Percentage Situations

Clare's aunt used a credit card to pay \$40 for an outfit. Six weeks later, the credit card company added \$0.60 to her bill.



Why does she owe \$40.60 for the outfit now?

Card Sort: Percentage Situations


Lin bought 1 pretzel from a snack cart.

Salted Pretzel	\$4.50
Cheesy Pretzel	\$4.50
Cinnamon Pretzel	\$4.50




Why did she pay \$4.83?

A car dealership paid \$9,000 for a car. Here is the sticker price for a customer to buy the car.

Fuel Economy and Environment		
	26 MPG	Annual fuel cost
	combined city/hwy	\$1,750
22	34	
city	highway	
Stock No: 74356986		
2013 4-DR Hatchback		
Wholesale Price:		
\$9,000		
Suggested Retail Price:		
\$10,395		

Why are they charging \$10,395?

Andre is saving money for college. He had \$1,500 in his account. At the end of the year, the bank adds 3% of the balance to his account.

	Responsible Bank 210 2nd Street Anytown, MH 06930	Savings Account Statement Page: 1 of 1
---	--	--

<p>Andre Person 1729 Euclid Ave Anytown, MH 06930</p>	<table border="1" style="width: 100%; border-collapse: collapse;"> <thead> <tr> <th style="text-align: center;">Statement Period</th> <th style="text-align: center;">Account No.</th> </tr> </thead> <tbody> <tr> <td style="text-align: center;">01/01/2016 - 12/31/2016</td> <td style="text-align: center;">1120635978</td> </tr> </tbody> </table>	Statement Period	Account No.	01/01/2016 - 12/31/2016	1120635978
Statement Period	Account No.				
01/01/2016 - 12/31/2016	1120635978				

Date	Description	Withdrawals	Deposits	Balance
2015-12-31	Previous Balance			\$1,500
2016-12-31	Dividend Earned: 3%		\$45.00	\$1,545

Why does his account have \$1,545 now?

Card Sort: Percentage Situations

Priya used this coupon to buy a game that normally costs \$24.50.



Why did she pay \$22.05?

Card Sort: Percentage Situations

Diego's uncle sells computers. In addition to his wages, he gets paid 20% of the amount he sells.

COMPUTER STORE INC.		EARNINGS STATEMENT	
EMPLOYEE NAME	EMPLOYEE ID	PAY PERIOD	
Diego's Uncle	1021	04/01-04/15	
INCOME	QUANTITY	RATE	CURRENT TOTAL
WAGE	40	\$14.75	\$590
SALES	\$3000	0.2	\$600
TOTAL			\$1,190

Why did he earn the extra \$600?