

## Grade 2 Unit 6

Lesson 12

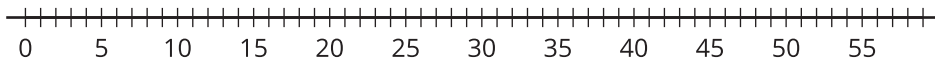
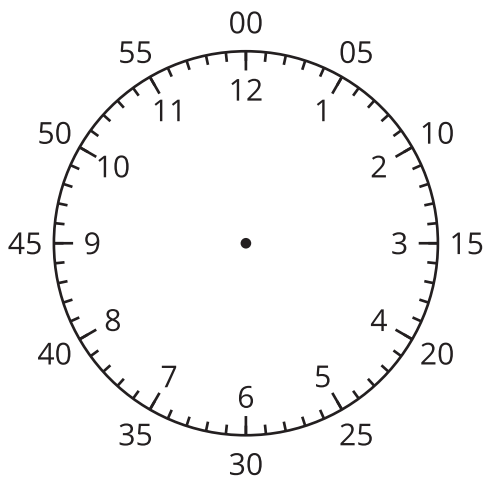
CC BY 2021 Illustrative Mathematics®

## Unit 6 Lesson 12: Count by 5 to Tell Time

### WU Notice and Wonder: Number Line and Clock (Warm up)

#### Student Task Statement

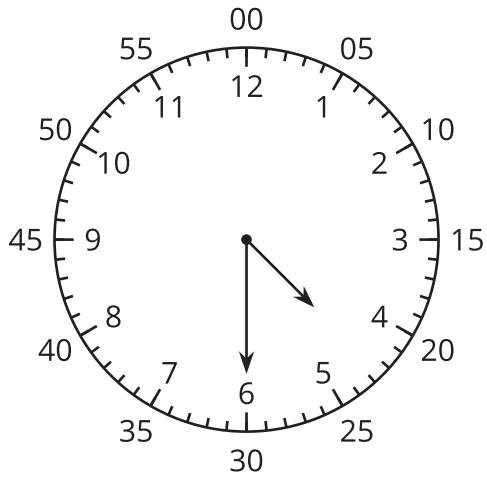
What do you notice? What do you wonder?



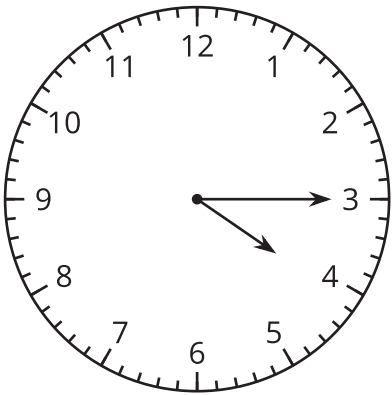
### 1 Count by 5 on the Clock

#### Student Task Statement

1. Discuss 2 ways to read the time on this clock.



2. What time does this clock show?



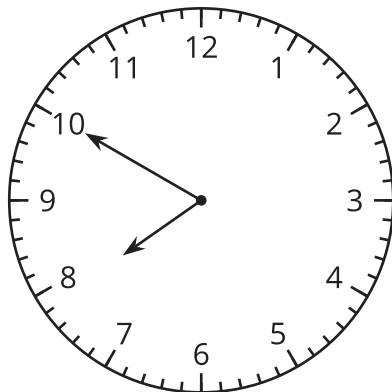
3. Read the time on each clock card with your partner. Put the clocks in order based on the times they show.

## 2 Write the Time

### Student Task Statement

Write the time shown on each clock.

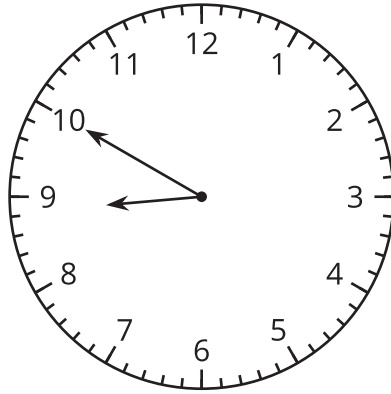
1.



---

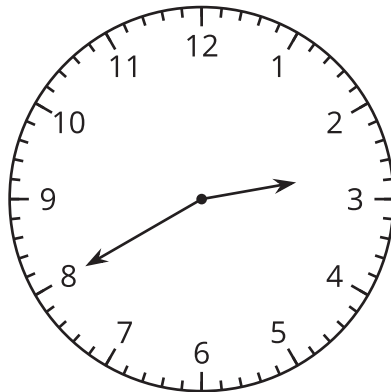
\_\_\_\_\_ : \_\_\_\_\_

2.



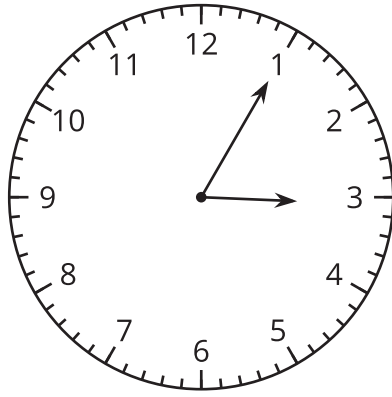
\_\_\_\_\_ : \_\_\_\_\_

3.



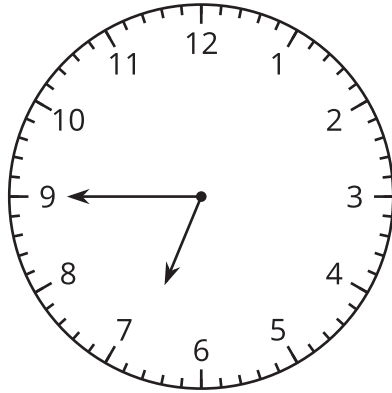
\_\_\_\_\_ : \_\_\_\_\_

4.



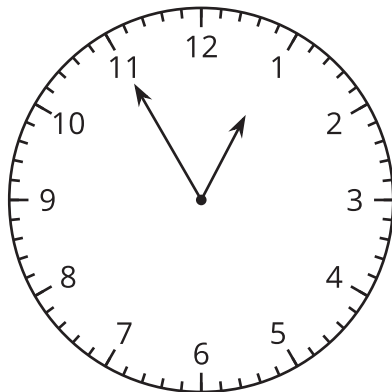
	•	
—	•	—

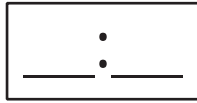
5.



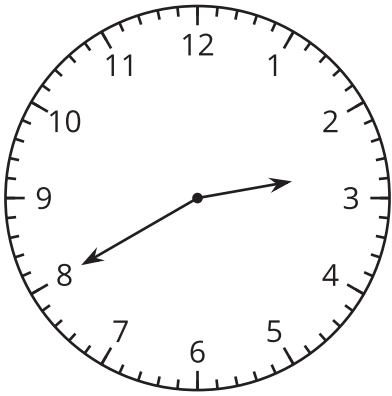
	•	
—	•	—

6.





### Activity Synthesis



### Images for Activity Synthesis

