



More than One Way

Let's find more than 1 way to solve a problem.

Warm-up

Number Talk: Expressions

Find the value of each expression.

- $3 + 1$

- $1 + 3$

- $4 - 1$

- $4 + 1$



Activity 1

Citrus Fruit

Han has 9 pieces of fruit.

Some are satsumas.

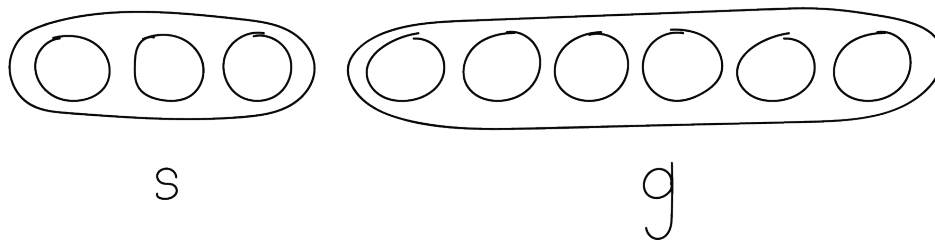
The rest are grapefruits.

How many satsumas?

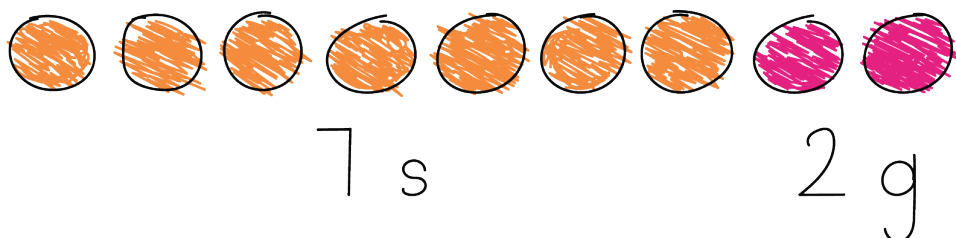
How many grapefruits?



Clare:



Diego:



Show your thinking using objects, drawings, numbers, or words.

Expression: _____

Activity 2

Dates to Stuff

Andre and his brother have 8 dates.

They stuff some with cheese.

They stuff the rest with almonds.

How many with cheese?

How many with almonds?

Expression: _____



Activity 3

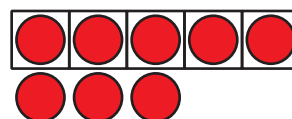
Centers: Choice Time

Choose a center.

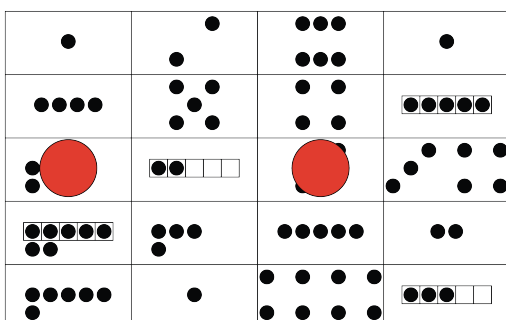
What's Behind My Back?



5-Frames



Make or Break Apart
Numbers



Math Stories

