

Fraction Match Part 1

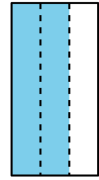
Fraction Match Part 1
A

$$2 \div 2$$

Fraction Match Part 1
E

$$4 \div 6$$

Fraction Match Part 1
I



Fraction Match Part 1
M



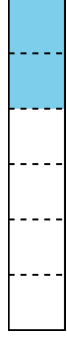
Fraction Match Part 1
B

$$2 \div 3$$

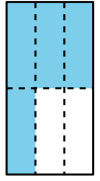
Fraction Match Part 1
F

$$5 \div 8$$

Fraction Match Part 1
J



Fraction Match Part 1
N



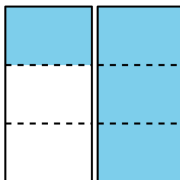
Fraction Match Part 1
C

$$2 \div 4$$

Fraction Match Part 1
G

$$7 \div 8$$

Fraction Match Part 1
K



Fraction Match Part 1
O



Fraction Match Part 1
D

$$2 \div 6$$

Fraction Match Part 1
H

$$4 \div 3$$

Fraction Match Part 1
L



Fraction Match Part 1
P

