



# ¿Cuántas faltan?

Llenemos tableros de 10 de diferentes maneras.

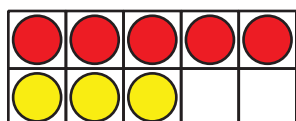


## Calentamiento

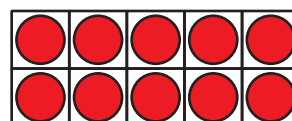
### Cuáles tres van juntos: Tableros de 10

¿Cuáles 3 van juntos?

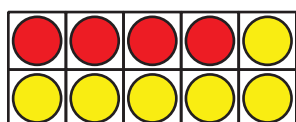
**A**



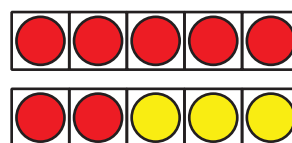
**B**



**C**



**D**



## Actividad 1

### Revuelve, saca y organiza con 10


$$10 = 5 + 5$$

$$10 = 9 + 1$$

$$10 = 4 + 6$$

$$10 = 2 + 8$$

$$10 = 6 + 4$$

$$10 = 3 + 7$$

$$10 = 1 + 9$$

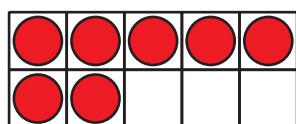
$$10 = 8 + 2$$

$$10 = 7 + 3$$

## Actividad 2

### ¿Cuántas faltan para llenar el tablero de 10?

1.



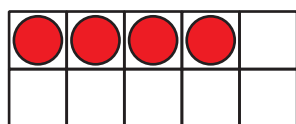
\_\_\_\_\_

$$10 = 7 + 3$$

$$10 = 8 + 2$$

$$10 = 5 + 5$$

2.



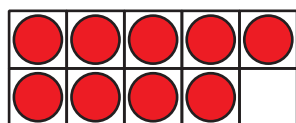
\_\_\_\_\_

$$10 = 8 + 2$$

$$10 = 1 + 9$$

$$10 = 4 + 6$$

3.



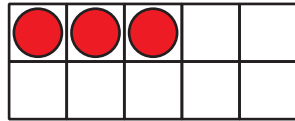
\_\_\_\_\_

$$10 = 9 + 1$$

$$10 = 5 + 5$$

$$10 = 7 + 3$$

4.



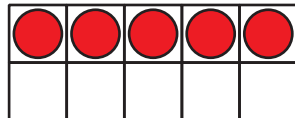

---

$$10 = 5 + 5$$

$$10 = 3 + 7$$

$$10 = 2 + 8$$

5.



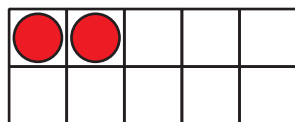

---

$$10 = 9 + 1$$

$$10 = 6 + 4$$

$$10 = 5 + 5$$

6.




---

$$10 = 1 + 9$$

$$10 = 2 + 8$$


$$10 = 4 + 6$$

## Actividad 3

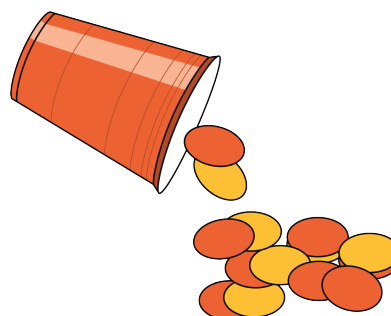
### Centros: Momento de escoger

Escoge un centro.

Contar colecciones



Revuelve y saca



Lanza y suma

