

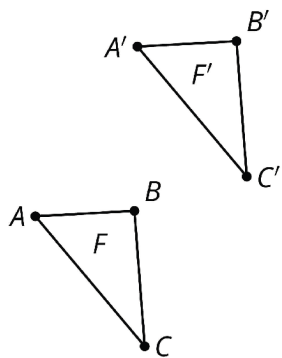
Name That Image  
Card AName That Image  
Card 1

Figure  $F$  has been rotated  $180^\circ$  around one of its vertices.

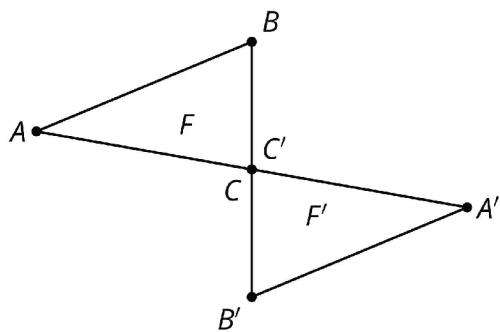
Name That Image  
Card BName That Image  
Card 2

Figure  $F$  has been rotated  $180^\circ$  around a point.

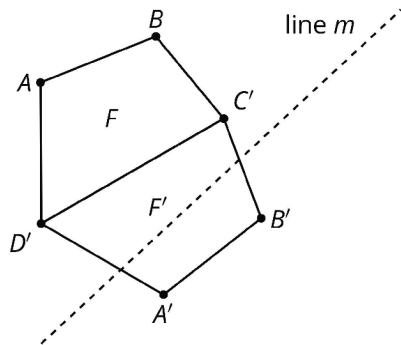
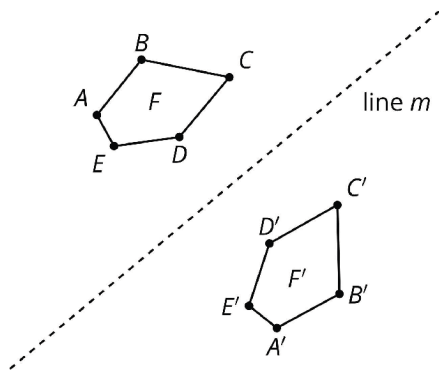
Name That Image  
Card CName That Image  
Card 3

Figure  $F$  is reflected over line  $m$ .

Name That Image

## Card D



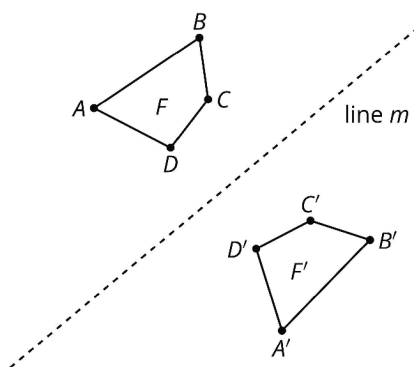
Name That Image

## Card 4

Figure  $F$  is translated by a directed segment with negative slope.

Name That Image

## Card E



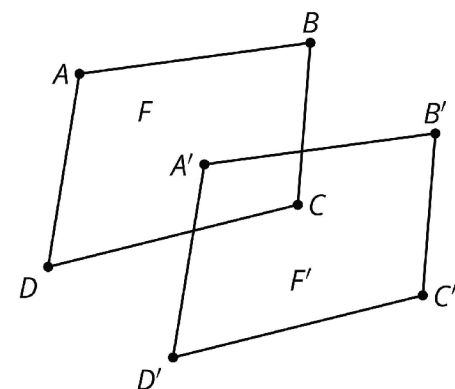
Name That Image

## Card 5

Figure  $F$  is reflected over side  $CD$ .

Name That Image

## Card F



Name That Image

## Card 6

Figure  $F$  is translated by a directed line segment that has a positive slope.