



# Groups That Look Alike

Let's find groups that have more, fewer, or the same number.

## Activity 1

### Which Has More?

There are 4 people.

There are 6 spoons.

Can each person get 1 spoon?

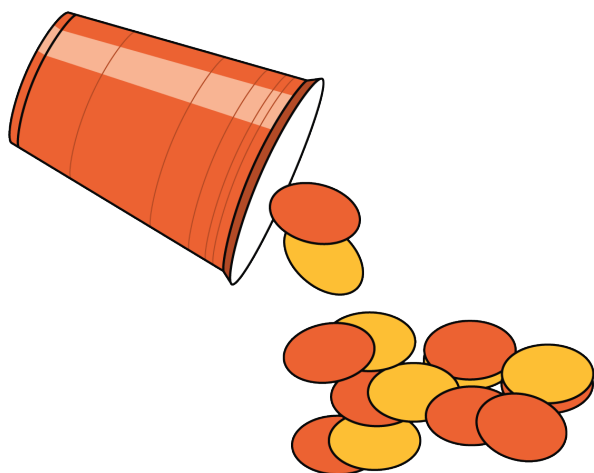


## Activity 3


### Centers: Choice Time

Choose a center.

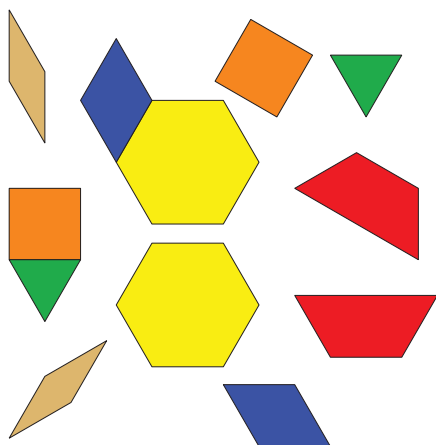
Shake and Spill



Math Fingers



Pattern Blocks



Picture Books

