



Solve Both Addends In Unknown Story Problems

Let's solve story problems.

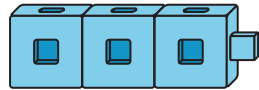
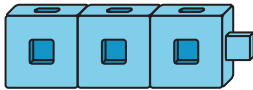


Warm-up

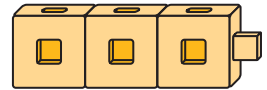
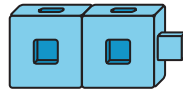
Which Three Go Together: Break Apart with Math Tools

Which 3 go together?

A



B



C



D



Activity 1

Fruit for Paletas

Jada and her brother made 6 paletas (pah-LAY-tuhs).

They made 2 flavors: lime and coconut.

How many are lime?

How many are coconut?



Activity 2

Pomegranates

Kiran had 7 pomegranates.

He put some on the shelf.

He put the rest in a basket.

How many are on the shelf?

How many are in the basket?



Expression: _____

Activity 3

Introduce Math Stories—How Many of Each?

