

## Lesson 15: Addition and Subtraction Expressions within 5

- Let's add and subtract within 5.

### Warm-up: Which One Doesn't Belong: Expressions and Equations

Which one doesn't belong?

A

$$3 + 1$$

B

$$3 = 2 + 1$$

C

$$3 + 0$$

D

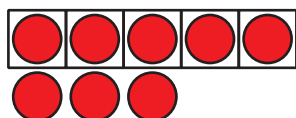
$$4 - 1$$



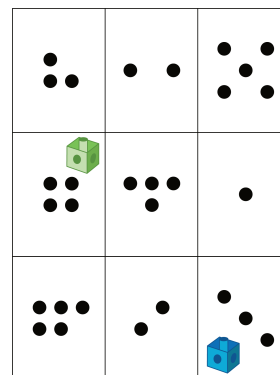
## 15.3: Centers: Choice Time

Choose a center.

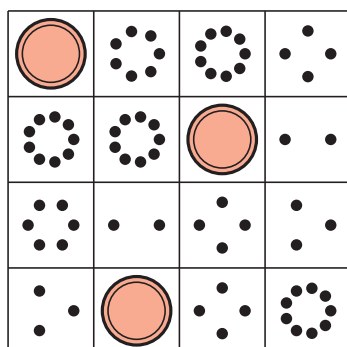
5-frames




Roll and Add



Bingo



Geoblocks



Find the Value of Expressions

$$3 + 5 \quad 7 - 5$$

