

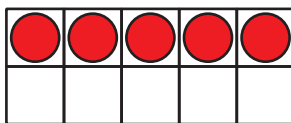

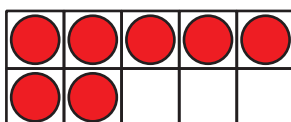
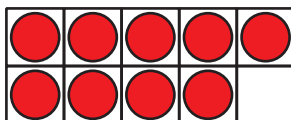
# Lesson 19: Find the Number that Makes 10

- Let's add to make 10.

## Warm-up: How Many Do You See: Make 10

How many do you see?

How do you see them?





## 19.1: Color the Number to Make 10

- Partner A: Color in 1 number.
- Partner B: Color in the number that makes 10 with the same color.
- Switch colors and roles and repeat.

10	5	3	2
7	1	9	8
4	8	9	4
6	2	3	0
1	7	5	6

Choose your favorite way to make 10.  
Fill in the equation.

$$10 = \underline{\quad\quad} + \underline{\quad\quad}$$



## 19.2: Add to Make 10

Fill in the equation to show ways to make 10.

- $10 = 9 + \underline{\hspace{2cm}}$

- $10 = 3 + \underline{\hspace{2cm}}$

- $10 = 5 + \underline{\hspace{2cm}}$

- $10 = 4 + \underline{\hspace{2cm}}$

- $10 = 8 + \underline{\hspace{2cm}}$

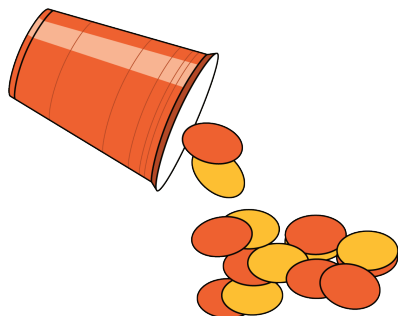
- $10 = 7 + \underline{\hspace{2cm}}$



## 19.3: Centers: Choice Time

Choose a center.


Shake and Spill



Number Race



Grab and Count



What's Behind My Back?



Pattern Blocks

