



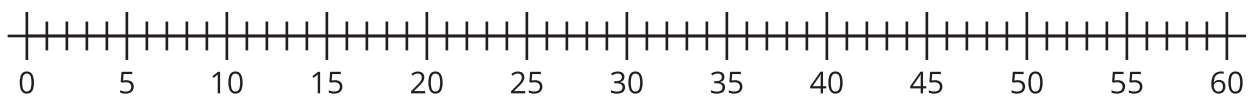
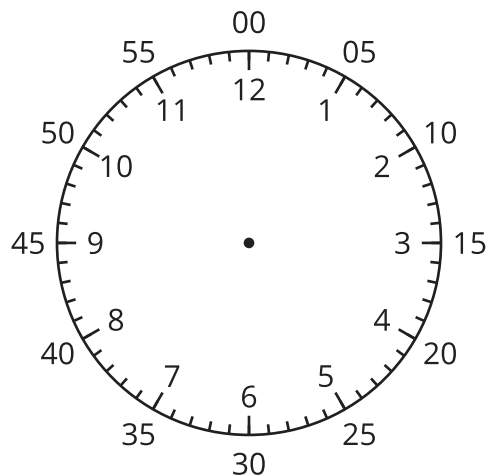
Count by 5 to Tell Time

Let's tell time.

Warm-up

Notice and Wonder: Number Line and Clock

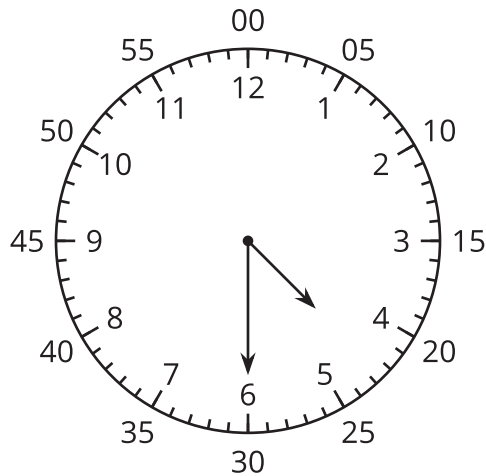
What do you notice? What do you wonder?



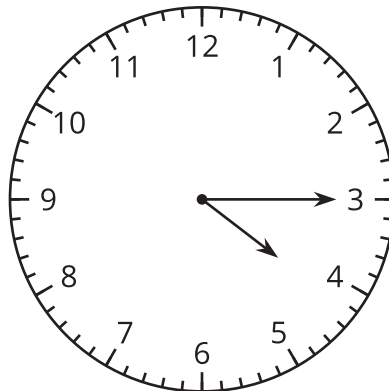
Activity 1

Count by 5 on the Clock

1. Discuss 2 ways to read the time on this clock.



2. What time does this clock show?



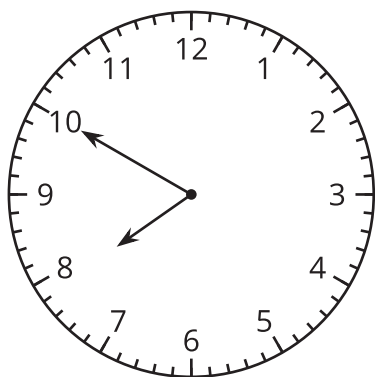
3. Read the time on each clock card with your partner. Put the clocks in order, based on the times they show.

Activity 2

Write the Time

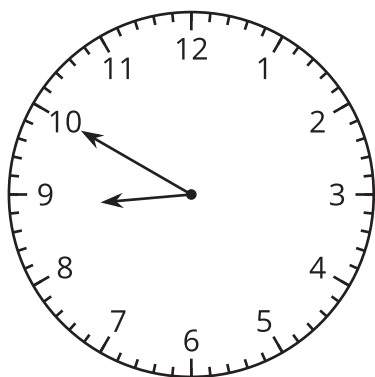
Write the time shown on each clock.

1.



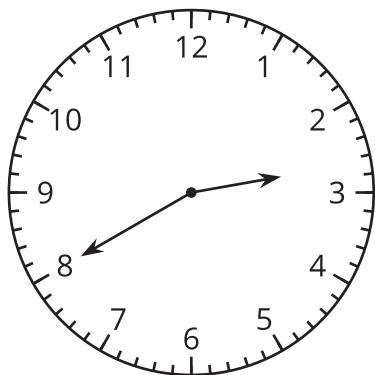
| | | |
|---|---|---|
| | : | |
| — | : | — |

2.



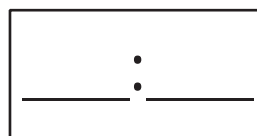
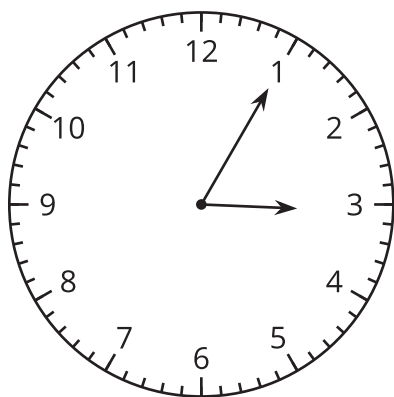
| | | |
|---|---|---|
| | : | |
| — | : | — |

3.

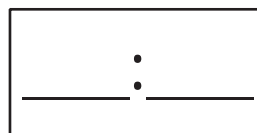
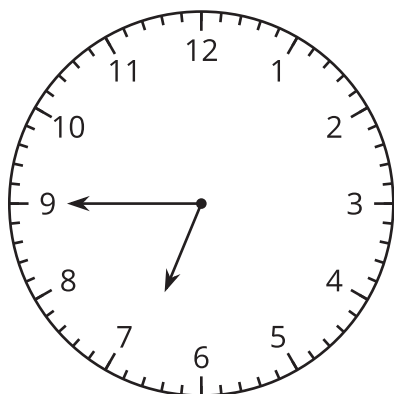


| | | |
|---|---|---|
| | : | |
| — | : | — |

4.



5.



6.

