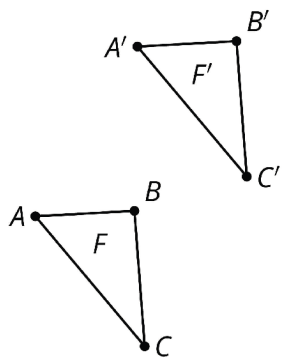


Name That Image

## Card A



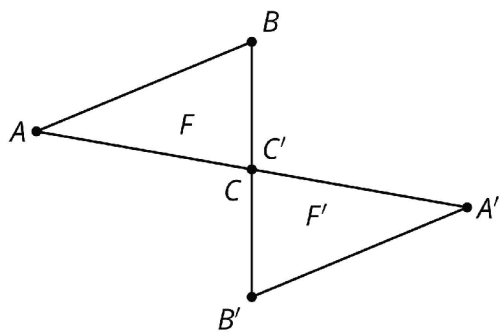
Name That Image

## Card 1

Figure  $F$  has been rotated  $180^\circ$  around one of its vertices.

Name That Image

## Card B



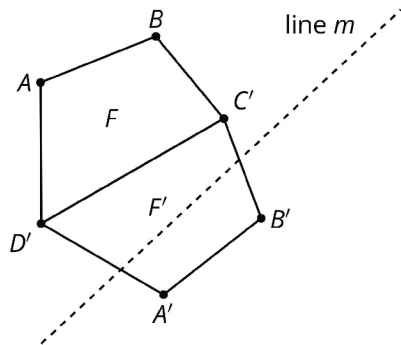
Name That Image

## Card 2

Figure  $F$  has been rotated  $180^\circ$  around a point.

Name That Image

## Card C



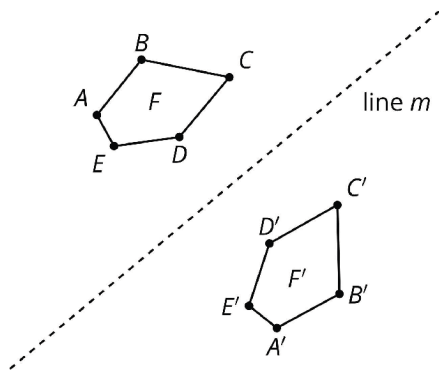
Name That Image

## Card 3

Figure  $F$  is reflected over line  $m$ .

Name That Image

## Card D



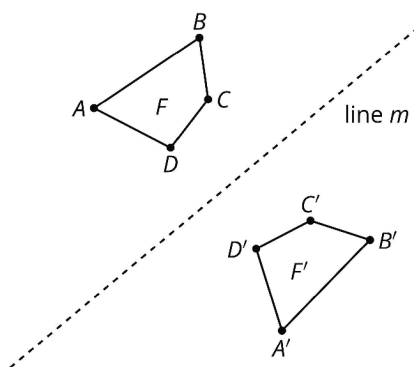
Name That Image

## Card 4

Figure  $F$  is translated by a directed segment with negative slope.

Name That Image

## Card E



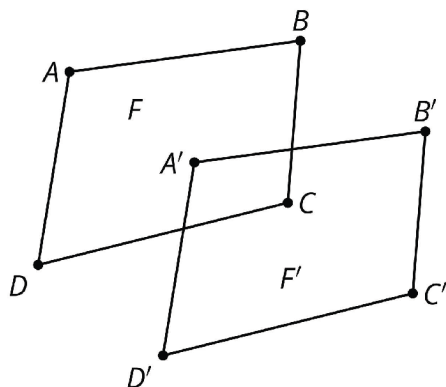
Name That Image

## Card 5

Figure  $F$  is reflected over side  $CD$ .

Name That Image

## Card F



Name That Image

## Card 6

Figure  $F$  is translated by a directed line segment that has a positive slope.