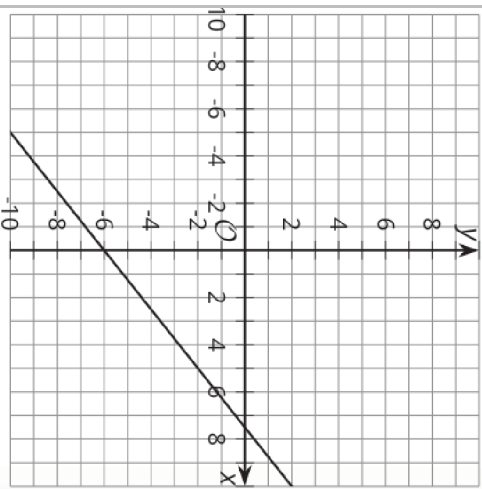
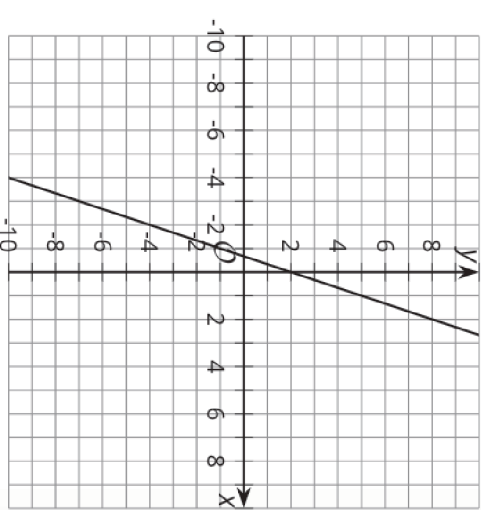


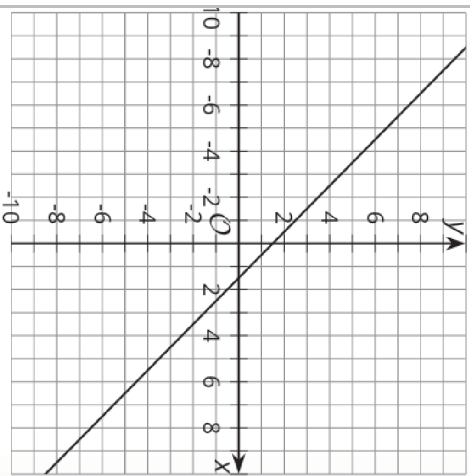
Matching, Matching, Spanish
 Gráfica A



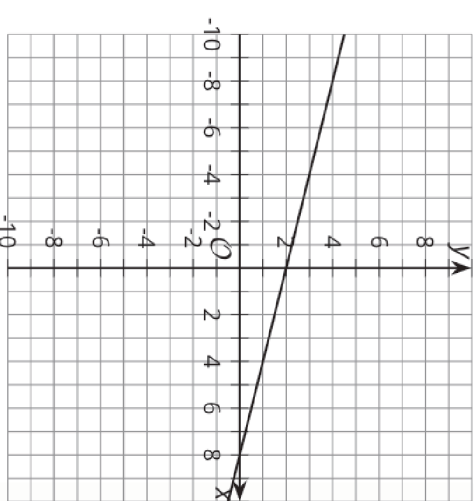
Matching, Matching, Spanish
 Gráfica B



Matching, Matching, Spanish
 Gráfica C



Matching, Matching, Spanish
 Gráfica D



Matching, Matching, Spanish Ecuación 1 $.5 = x + y$	
Matching, Matching, Spanish Ecuación 2 $y = \frac{4}{5}x - 6$	Matching, Matching, Spanish Ecuación 3 $= 3x + 2$
Matching, Matching, Spanish Ecuación 4 $2x + 8y = 16$	Matching, Matching, Spanish Ecuación 5 $y - 4x = -30$
Matching, Matching, Spanish Ecuación 6 $8 = x + 4y$	