

Representations of Tens  
A

1 ten

Representations of Tens  
B

2 tens

Representations of Tens  
C

3 tens

Representations of Tens  
D

4 tens

Representations of Tens  
E

5 tens

Representations of Tens  
F

6 tens

Representations of Tens  
G

7 tens

Representations of Tens  
H

8 tens

I  
Representations of Tens

9 tens

K  
Representations of Tens

20

J  
Representations of Tens

10

L  
Representations of Tens

30

Representations of Tens  
M

40

Representations of Tens  
N

50

Representations of Tens  
O

60

Representations of Tens  
P

70

Q  
Representations of Tens

80

R  
Representations of Tens

90


S  
Representations of Tens




T  
Representations of Tens




U  
Representations of Tens




W  
Representations of Tens



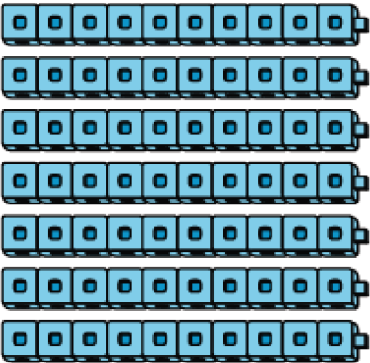
V  
Representations of Tens




X  
Representations of Tens




Representations of Tens  
Y



Representations of Tens  
AA



Representations of Tens  
Z




Match each picture to the number and words that show the same amount.

30  
thirty



7 tens

50  
fifty




5 tens

20  
twenty




1 ten

60  
sixty




4 tens

10  
ten



8 tens

80  
eighty




3 tens

40  
forty




9 tens

70  
seventy



2 tens

90  
ninety



6 tens