

Sales Tax	Markup	Interest
Gratuity (Tip)	Markdown (Discount)	Commission

Card Sort: Percentage Situations

Kiran ate breakfast at a café. The total check was \$5. Here is the money he left.



Why did he pay \$5.75?

Card Sort: Percentage Situations

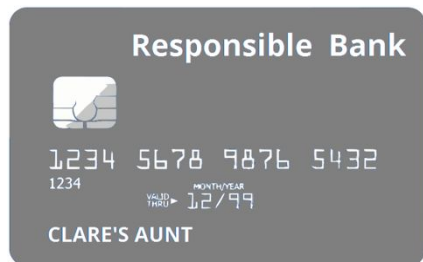
Tyler bought a shirt from the 25% off rack. It normally costs \$16. Here is the money he paid.



Why did he pay \$12?

Card Sort: Percentage Situations

Clare's aunt used a credit card to pay \$40 for an outfit. Six weeks later, the credit card company added \$0.60 to her bill.



Why does she owe \$40.60 for the outfit now?

Card Sort: Percentage Situations

Lin bought 1 pretzel from a snack cart.


Salted Pretzel	\$4.50
Cheesy Pretzel	\$4.50
Cinnamon Pretzel	\$4.50



Why did she pay \$4.83?

A car dealership paid \$9,000 for a car. Here is the sticker price for a customer to buy the car.

Fuel Economy and Environment



26 MPG
combined city/hwy

Annual fuel cost
\$1,750

22 city 34 highway

Stock No: 74356986

2013 4-DR Hatchback

Wholesale Price:


\$9,000

Suggested Retail Price:

\$10,395

Why are they charging \$10,395?

Andre is saving money for college. He had \$1,500 in his account. At the end of the year, the bank adds 3% of the balance to his account.



Responsible Bank

210 2nd Street

Anytown, MH 06930

Savings Account Statement

Page: 1 of 1

Andre Person

1729 Euclid Ave

Anytown, MH 06930

Statement Period	Account No.
01/01/2016 - 12/31/2016	1120635978

Date	Description	Withdrawals	Deposits	Balance
2015-12-31	Previous Balance			\$1,500
2016-12-31	Dividend Earned: 3%		\$45.00	\$1,545

Why does his account have \$1,545 now?

Card Sort: Percentage Situations

Priya used this coupon to buy a game that normally costs \$24.50.



Why did she pay \$22.05?

Card Sort: Percentage Situations

Diego's uncle sells computers. In addition to his wages, he gets paid 20% of the amount he sells.

COMPUTER STORE INC.		EARNINGS STATEMENT	
EMPLOYEE NAME	EMPLOYEE ID	PAY PERIOD	
Diego's Uncle	1021	04/01-04/15	
INCOME	QUANTITY	RATE	CURRENT TOTAL
WAGE	40	\$14.75	\$590
SALES	\$3000	0.2	\$600
TOTAL			\$1,190

Why did he earn the extra \$600?