



Towers of 10

Let's figure out how many cubes are hidden.

Warm-up

What Do You Know about 10?

What do you know about 10?

Activity 2

How Many Cubes Are Hidden?

Han made a tower with 10 cubes.

He broke his tower into 2 parts and hid 1 part.

He shows 4 cubes.

How many cubes is Han hiding?

$$10 = \underline{\quad\quad} + \underline{\quad\quad}$$



Activity 3


Centers: Choice Time

Choose a center.

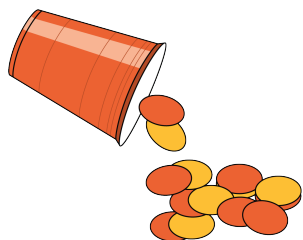
What's Behind My Back?




Math Fingers



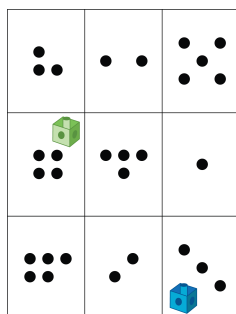
Shake and Spill



Counting Collections



Roll and Add

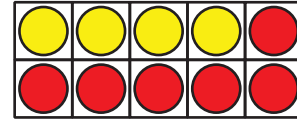
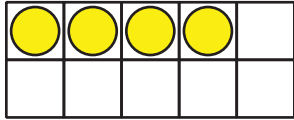


Section C Summary

We can make 10.


We can use a 10-frame and our fingers.

We can find out how many more to make 10.




There are 4 counters.

We need 6 more to make 10.



There are 9 fingers.

We need to put up 1 more to make 10.



We used equations to show ways we made 10.

$$10 = 4 + 6$$

$$10 = 9 + 1$$