



# Compare Numbers and Images

Let's figure out which number is more.

Warm-up

## Act It Out: Pass Out Books

Diego has 5 books.

He gets 1 more book.

How many books does Diego have now?



## Activity 1

### Which Has More?

1.



---

---



---

---

---

---

2.



---

---



---

---

---

---

3.



---

---

---

---

---

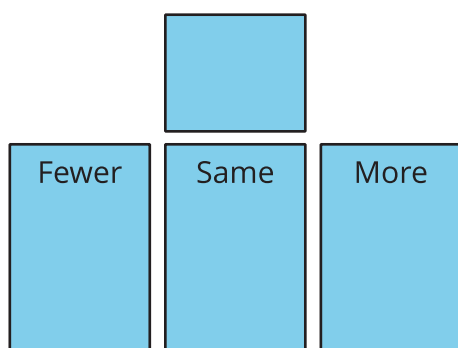
---

## Activity 3


### Centers: Choice Time

Choose a center.

Fewer, Same, More



Math Libs



Number Race

