



# Compare Numbers

Let's figure out which number is more and which is less.

Warm-up

## Act It Out: Hand Out Paper

9 kids get blue paper.

5 kids get red paper.

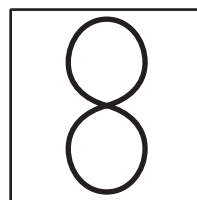

Did fewer kids get blue or red?

## Activity 1

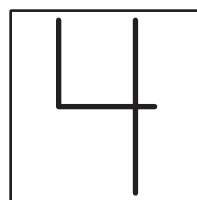
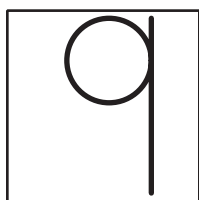
### Which Number Is More?

Circle the number that is more.

1.



2.



## Activity 2

### Which Number Is Less?

Write the numbers you roll.  
Circle the number that is less.

---

---

---

---

---

---

---

---

---

---

---

---

---

---

---

---

---

---



Write the numbers you roll.  
Circle the number that is less.

---

---

---

---

---

---

---

---

---

---

---

---

---

---

---

---

---

---

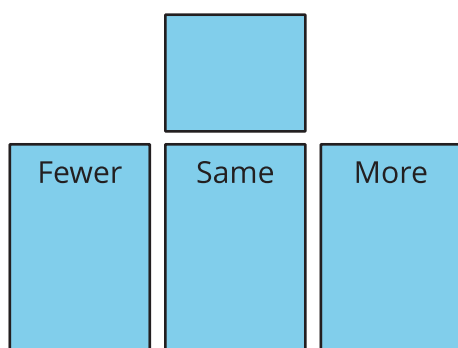


## Activity 3


### Centers: Choice Time

Choose a center.


Fewer, Same, More



Math Libs



Number Race


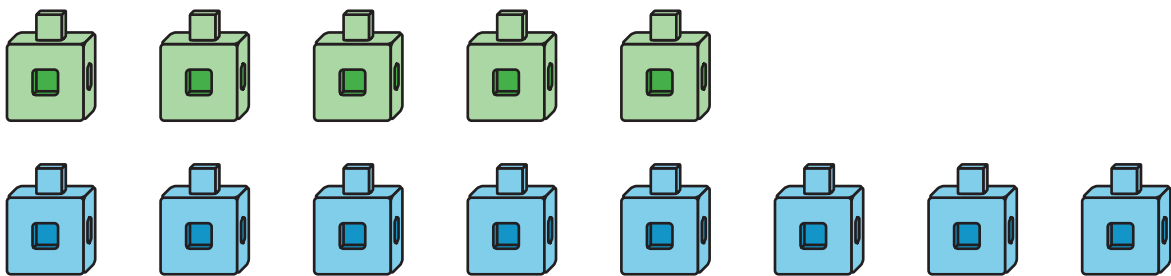


## Section D Summary

We can compare numbers.

5

8



1, 2, 3, 4, **5**, 6, 7, **8**, 9, 10

5 is less than 8.

8 is more than 5.