

Card Sort: At the Beach

Card Sort: At the Beach

A

Lin found 28 more shells than Diego.
Diego found 32 shells.
How many shells did Lin find?

Card Sort: At the Beach

B

Lin counted 28 boats.
Diego counted 32 boats.
How many more boats did Diego count?

Card Sort: At the Beach

C

Lin saw 32 starfish.
Diego saw 28 fewer starfish than Lin.
How many starfish did Diego see?

Card Sort: At the Beach

D

Lin found 40 fewer crabs than Diego.
Diego found 57 crabs.
How many crabs did Lin find?

Card Sort: At the Beach

E

Lin counted 57 beach chairs.
She counted 40 more people than chairs.
How many people did she count?

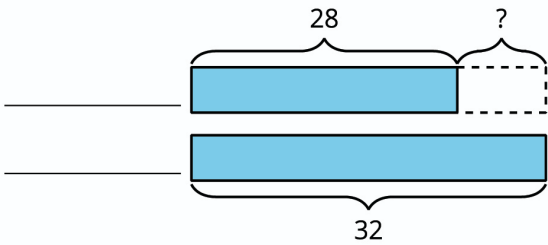
Card Sort: At the Beach

F

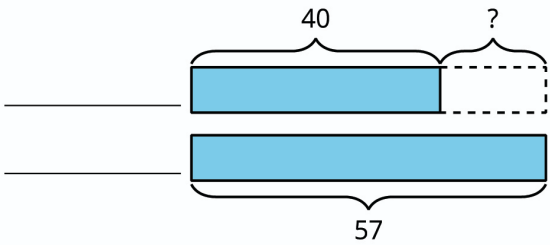
Diego saw 40 seagulls.
Lin saw 57 seagulls.
How many fewer seagulls did Diego see?

Card Sort: At the Beach

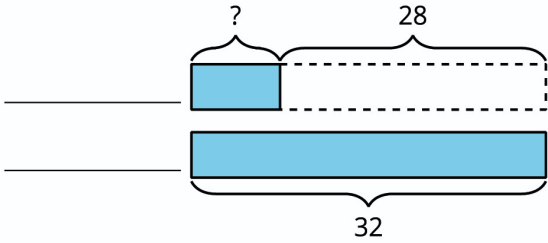
Card Sort: At the Beach
G



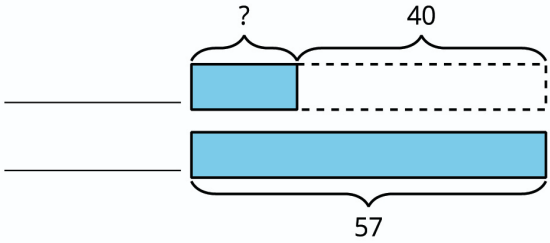
Card Sort: At the Beach
H



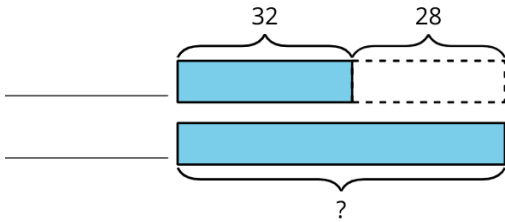
Card Sort: At the Beach
I



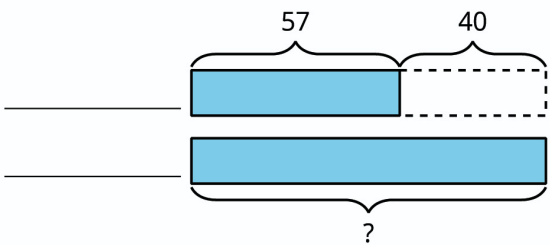
Card Sort: At the Beach
J



Card Sort: At the Beach
K



Card Sort: At the Beach
L



Card Sort: At the Beach

Card Sort: At the Beach

M

$$32 - 28 = ?$$

Card Sort: At the Beach

N

$$57 - 40 = ?$$

Card Sort: At the Beach

O

$$28 + ? = 32$$

Card Sort: At the Beach

P

$$40 + ? = 57$$

Card Sort: At the Beach

Q

$$32 + 28 = ?$$

Card Sort: At the Beach

R

$$57 + 40 = ?$$