



# Solve Story Problems with Three Numbers

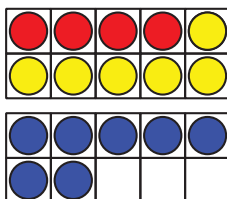
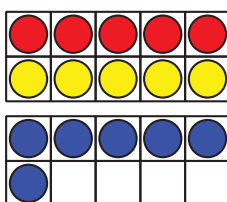
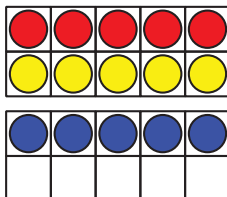
Let's solve story problems with 3 numbers.

## Warm-up

### How Many Do You See: 10-frames

How many do you see?

How do you see them?



## Activity 1

### Louis Agassiz Fuertes's Birds

7 blue birds fly in the sky.

8 brown birds sit in a tree.

3 baby birds sit in a nest.

How many birds are there altogether?

Show your thinking using objects,  
drawings, numbers, or words.



## Activity 2

### Fuertes's Bird Cards

Show your thinking using drawings, numbers, or words.

1. Noah has 3 bird cards.

Clare has 4 cards.

Jada has 7 cards.

How many cards do they have altogether?

2. Jada uses her cards to name birds she sees.

She sees 4 orioles.

She sees 2 goldfinches.

She sees 8 sparrows.

How many birds does Jada see?

3. Write your own problem.

We see some birds.

We see 9 \_\_\_\_\_.

We see 8 \_\_\_\_\_.

We see 1 \_\_\_\_\_.

How many birds do we see altogether?