



# Ten as a Unit

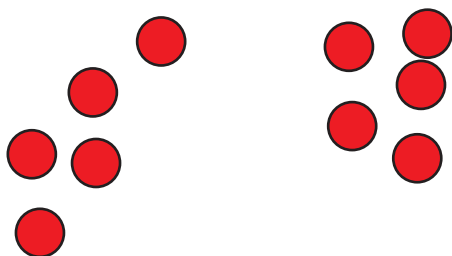
Let's explore teen numbers.

## Warm-up

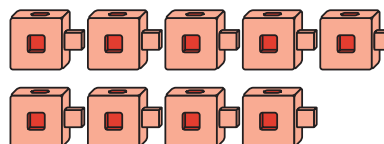
### Which Three Go Together: Groups of 10

Which 3 go together?

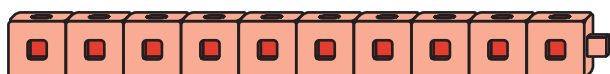
A



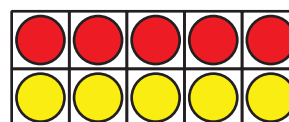
B



C



D



## Activity 1

### Count and Show How Many

How many are there?

Show how you counted.

My count:

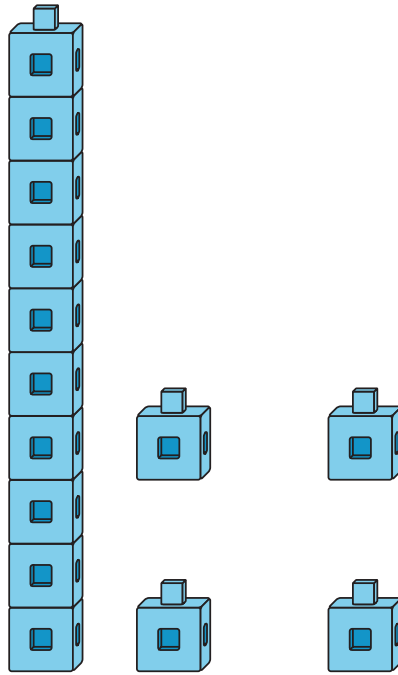
How many? \_\_\_\_\_



## Activity 2

### Building Teen Numbers

Clare shows a number like this.



Choose 4 numbers to represent.

Circle them.

10

11

12

13

14

15

16

17

18

19

Use connecting cubes to show each number like Clare did.

What did you notice as you were showing each number?

---

---

---

---

