

Puzzle 1

Make each equation true. Use number cards 0-9.

$63 = \square + 8$	$63 = \square + \square$
$63 = \square + 52$	$63 = \square + \square_9$
$63 = \square + 24$	$63 = \square + 25$

Puzzle 2

Make each equation true. Use number cards 0-9.

$80 = \square + 41$	$80 = \square + 7$
$80 = 27 + \square$	$80 = \square + 6$
$80 = \square + 16$	$80 = \square + 29$

Puzzle 3

Make each equation true. Use number cards 0-9.

$27 = 1 \square + 14$	$27 = 1 \square + 1 \square$
$27 = 9 + \square \square$	$27 = 2 \square + 3$
$2 \square = 1 \square + 11$	$27 = 1 \square + 8$







Puzzle 4

Make each equation true. Use number cards 0-9.

$92 =$ <input type="text"/> <input type="text"/> <input type="text"/> + 6	$92 =$ <input type="text"/> + 83
$92 =$ 7 <input type="text"/> + 1 <input type="text"/>	$92 =$ 9 <input type="text"/> + <input type="text"/>
$92 =$ 39 + 5 <input type="text"/>	$92 =$ 78 + <input type="text"/> <input type="text"/>

Puzzle 5

Make each equation true. Use number cards 0-9.

$46 =$  $+$ 23	$46 = 1$  $+$ 31
$46 = 4$  $+$ 5	$46 = 3$  $+$ 7
$46 = 3$  $+$ 10	$46 = 3$  $+$ 8