



Patterns in Addition

Let's look for and use patterns to help us add within 20.

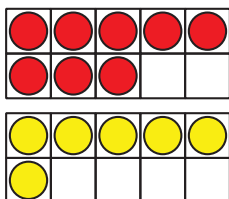
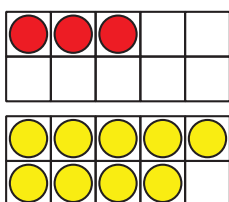
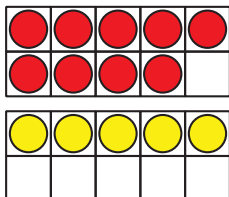


Warm-up

How Many Do You See: More Double 10-frames

How many do you see?

How do you see them?

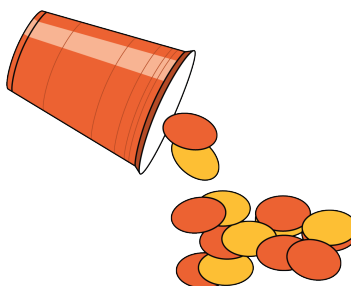


Activity 3

Centers: Choice Time

Choose a center.

Shake and Spill



Compare



Number Puzzles

$$14 = 8 +$$

